




# **«Числа от 1 до 10. Закрепление».**

*Урок по математике в 1 классе  
УМК «Школа России»*

# Восстанови числовой ряд





6	
1	
	4
3	



7	
1	
	5
3	





10	
1	
	8
3	
	6
5	





1

2

3

4

5

6

7

8

$$3 \ominus 2 = 1$$

$$4 \ominus 1 = 3$$

$$5 \ominus 1 = 4$$

$$2 \oplus 1 = 3$$


$$1 \oplus 3 = 4$$


$$1 \oplus 4 = 5$$

$$8 \ominus 1 = 7$$

$$6 \oplus 1 = 7$$

$$7 \ominus 1 = 6$$





$2 \bigcirc 3$

$8 \bigcirc 5$

$9 \bigcirc 8 + 1$

$6 \bigcirc 5$


$6 \bigcirc 6$

$2 \bigcirc 8 - 1$

$7 \bigcirc 8$

$9 \bigcirc 6$


$2 \bigcirc 3 - 2$



У Лунтика было ... .



3



1

Сколько ... ?



3

+

1

=

4







$$5 - 1 = 4$$

5





**Соотнеси картинку и число.**

№1

$2 + 2 =$

$6 + 2 =$

$7 - 4 =$

$4 + 2 =$

$8 - 3 =$

№2

$3 + \square = 6$

$7 + \square = 9$

$\square + 2 = 10$

$5 + \square = 8$

$10 - \square = 7$

№3

$10 - \square = 2$

$7 - \square = 3$

$\square - 5 = 4$

$9 - \square = 6$

$8 - \square = 10$