

Собери рисунок


Сравнение выражений

Математика 1 класс



*Неверова Ольга
Ивановна
учитель начальных
классов
МКОУ Шубенская СОШ
Зонального района
Алтайского края*



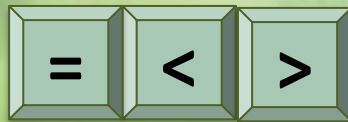



**Вычисли значения
выражений и
поставь знаки $>$, $<$
или $=$.**

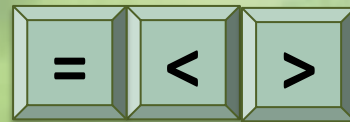


**Переход щелчком
на**



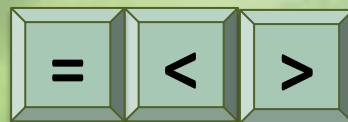

$$8 - 1 > 7 - 1$$



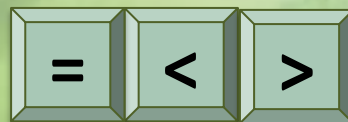
$$5 - 1 < 6 - 1$$



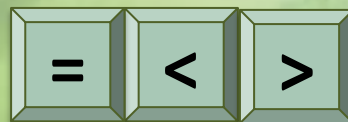
$$3 - 3 = 2 - 2$$



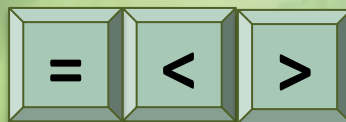
$$3 + 3 > 3 + 2$$



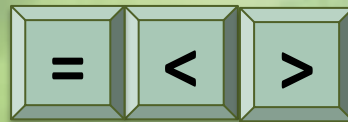
$$7 + 0 < 6 + 2$$



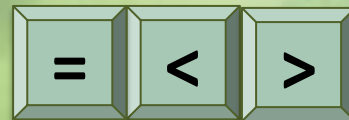
$$8 - 2 < 4 + 3$$



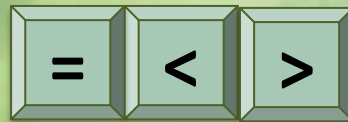
$$3 + 2 = 8 - 3$$



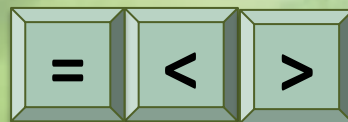

$$5 + 1 > 8 - 3$$



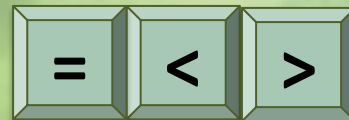

$$9 - 1 - 1 < 6 + 2$$



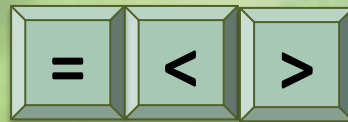
$$3 + 2 + 1 = 9 - 3$$



$$7 + 2 > 9 - 2 + 1$$



$$8 - 0 = 5 + 2 + 1$$



Источники

- Фон
- Маша
- Маша
- Маша
- Маша
- Маша
- Медведь

