






Весёлые задачи.









5

6

8


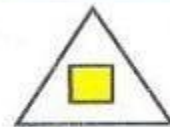

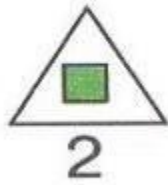







7	
<i>1</i>	<i>6</i>
<i>2</i>	<i>5</i>
<i>3</i>	<i>4</i>
<i>4</i>	<i>3</i>
<i>5</i>	<i>2</i>
<i>6</i>	<i>1</i>

7★ Выбери нужную фигуру из пронумерованных:



7 7 7 7 7

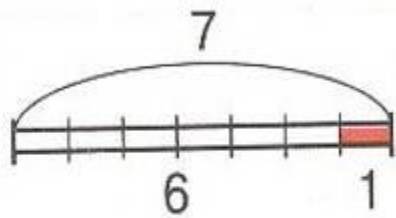
11 12 13 14



11 12 13 14



1

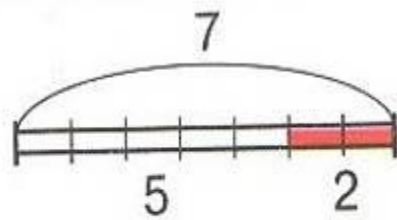


$$6 + 1 = 7$$

$$1 + 6 = 7$$

$$7 - 6 = 1$$

$$7 - 1 = 6$$

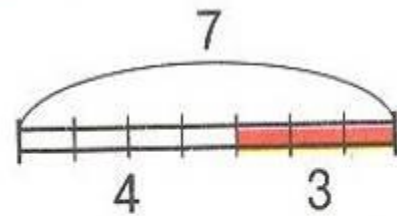


$$5 + 2 = 7$$

$$2 + 5 = 7$$

$$7 - 2 = 5$$

$$7 - 5 = 2$$




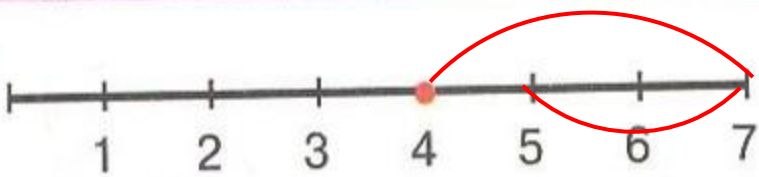
$$4 + 3 = 7$$

$$3 + 4 = 7$$

$$7 - 4 = 3$$

$$7 - 3 = 4$$

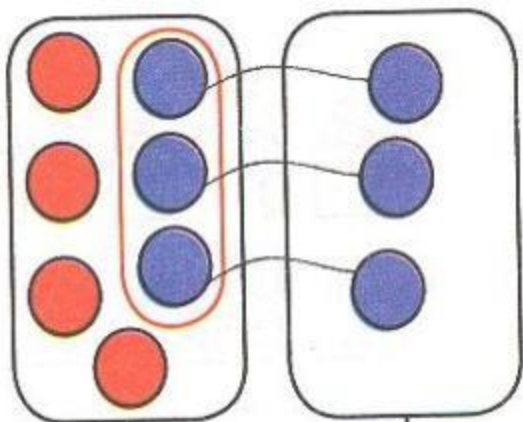
2



$$4 + 3 - 2 = 5$$



$$7 - 5 + 3 = 5$$

3





$$7 > 3$$

>, <, =

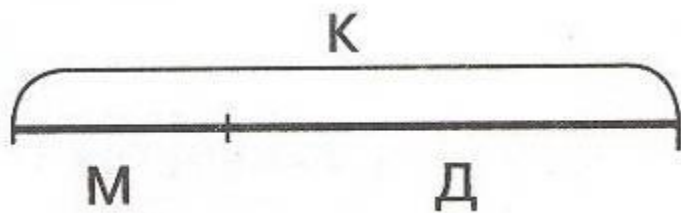


$$3 < 7$$



$$7 > 2$$

4




$$M + D = K$$

$$K - M = D$$

$$D + M = K$$

$$K - D = M$$







Беляева Наталья Ивановна, МОУ-СОШ №4 г. Асино, Томская область.