



Числа от 1 до 20





19 это 10 и ...

9

18 это 10 и ...

8

17 это 10 и ...

7

16 это 10 и ...

6

15 это 10 и ...

5

14 это 10 и ...

4

13 это 10 и ...

3

12 это 10 и ...

2

11 это 10 и ...

1

The background of the image is a solid, warm orange-brown color. Overlaid on this background are several faint, stylized silhouettes of autumn leaves in various shapes and sizes, scattered across the frame. The leaves are rendered in a slightly darker shade of the background color, creating a subtle, textured effect.

15

11

16

12

12

13

14

16

A yellow scroll icon with a white outline, featuring a rolled-up edge on the left and a small circle at the top right. The number 19 is written in white in the center.

19

A yellow scroll icon with a white outline, featuring a rolled-up edge on the left and a small circle at the top right. The number 15 is written in white in the center.

15

A yellow scroll icon with a white outline, featuring a rolled-up edge on the left and a small circle at the top right. The number 14 is written in white in the center.

14



14



12



13



12

The background of the entire image is a solid dark orange color, overlaid with several faint, semi-transparent illustrations of autumn leaves in various shades of brown and orange. The leaves are scattered across the page, with some showing detailed vein patterns.
$$10 + 4 = 14$$

$$10 + 9 = 19$$

$$10 + 10 = 20$$

$$10 + 5 = 15$$


$$10 + 7 = 17$$

$$10 + 7 = 17$$



2	0		1	9		1	8		1	7		1	6		1	5			
---	---	--	---	---	--	---	---	--	---	---	--	---	---	--	---	---	--	--	--

18 16 15 20 17 19 14



2. Дополни записи.

$10 + \square = 11$

$10 + \square = 14$

$10 + \square = 19$

$\square + 3 = 13$

$\square + 10 = 20$



$\square + 5 = 15$

$10 + 8 = \square$

$10 + 6 = \square$

$10 + 7 = \square$

3. Сколько клеток занимает буква?

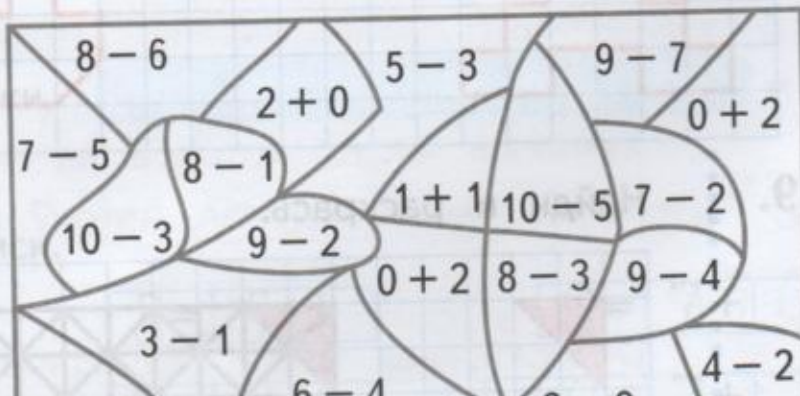


4. Раскрась.

5 — 

2 — 

7 — 



		=	
--	--	---	--

6. В каждой таблице должны быть числа от 12 до 20. Запиши пропущенные числа.

	15	13
17	20	16
12	14	18


13	17	19
	20	14
18	16	12

14	18
13	
19	12

Проверь свою работу: 17, 19, 15.

7. В две корзины поровну разложили яблоки. В одной корзине 9 яблок. Сколько яблок в другой корзине?

8. Выбери фигуру и объясни, как будешь рисовать. Нарисуй.



9. Найди и раскрась.

