

УМНОЖЕНИЕ НА 3

2 «а» класс

УМК «Начальная школа 21 века»



**Найдите в каждом ряду
«лишнее» число.**

40, 8, 90, 16, 20

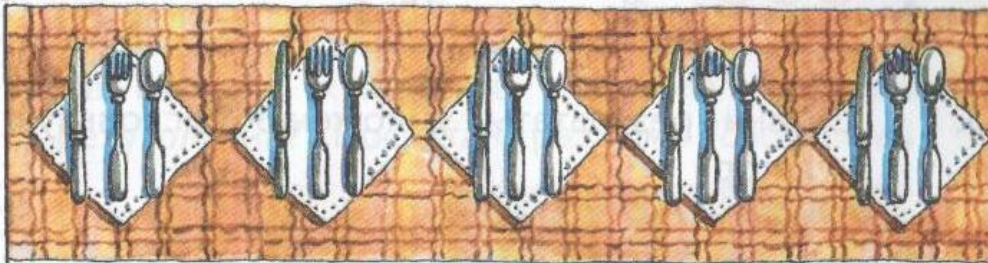
7, 5, 3, 9, 15, 6



1.



Для гостей разложили столовые приборы: ложки, ножи, вилки. Сколько на рисунке столовых приборов?



Как решил задачу Волк и как — Заяц? Кто из них быстрее справился с заданием? Почему?









$$\begin{aligned} 3 + 3 &= 6 \\ 6 + 3 &= 9 \\ 9 + 3 &= 12 \\ 12 + 3 &= 15 \end{aligned}$$

Таблица умножения числа 3













$$\begin{aligned} 3 \cdot 1 &= 3 \\ 3 \cdot 2 &= 6 \\ 3 \cdot 3 &= 9 \\ 3 \cdot 4 &= 12 \\ 3 \cdot 5 &= 15 \\ 3 \cdot 6 &= 18 \\ 3 \cdot 7 &= 21 \\ 3 \cdot 8 &= 24 \\ 3 \cdot 9 &= 27 \end{aligned}$$


















$$3 - 2 =$$



$$3 - 4 =$$



$$3 - 5 =$$



Физминутка



ЗАДАЧА №7 с.108



3 3 3 3 3 3 3 3 3

Решение: $3 \cdot 9 = 27$ (л.)

**ОТВЕТ: 27 л. сока в 9
банках**

ЗАДАЧА №11 с.108

• 3



$$\bullet 3 \cdot 3 = 9(\text{p.})$$



$$3 \cdot 7 = 21(\text{p.})$$



$$3 \cdot 9 = 27(\text{p.})$$

ВЗАИМОПРОВЕРКА:

$3 \cdot 4 = 12$

$3 \cdot 8 = 24$

$3 \cdot 5 = 15$

$3 \cdot 6 = 18$

$3 \cdot 7 = 21$

$3 \cdot 2 = 6$

Спасибо за
внимание!