

*Наурыз мерекелеріңіз  
құтты болсын!*



# Е.Өмірбаев атындағы орта мектебі





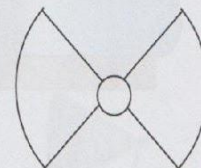

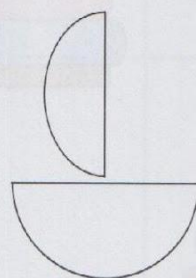
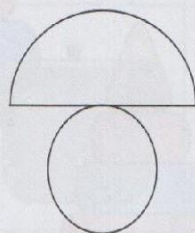

## Сабақтың тақырыбы: Бүтін және бөлік

Мақсаты: Фигураларды тең бөліктерге бөлу мен таныстыру,  
«жарты», ширек» түсініктерін бекіту.




# №1 тапсырма

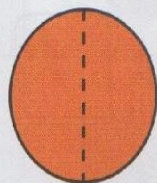
Суреттерді көрсетілген түске боя






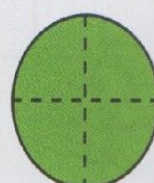
бүтін



жарты



ширек



№2

The image shows three house-shaped math problems on a grid background. Each house has a triangular roof with a number in a circle and a two-column body with numbered rows and empty boxes.

**House 1 (Left):** The roof contains the number 7. The body has 6 rows. The left column contains numbers 1 through 6. The right column contains empty boxes.

7	
1	
2	
3	
4	
5	
6	

**House 2 (Middle):** The roof contains the number 8. The body has 7 rows. The left column contains numbers 1 through 7. The right column contains empty boxes.

8	
1	
2	
3	
4	
5	
6	
7	


**House 3 (Right):** The roof contains the number 6. The body has 5 rows. The left column contains numbers 1 through 5. The right column contains empty boxes.

6	
1	
2	
3	
4	
5	




## №3 тапсырма

Шеңбердің қай бөлігі қиып алынады?

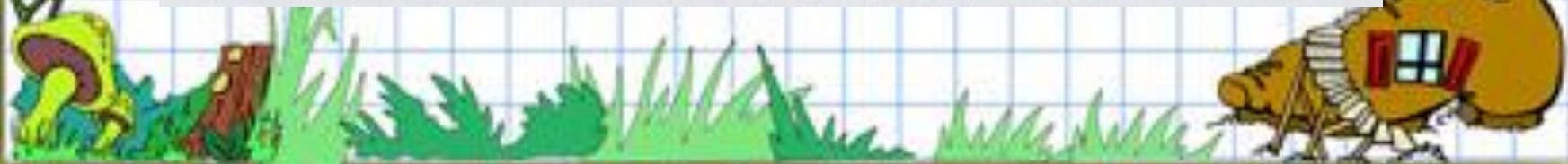
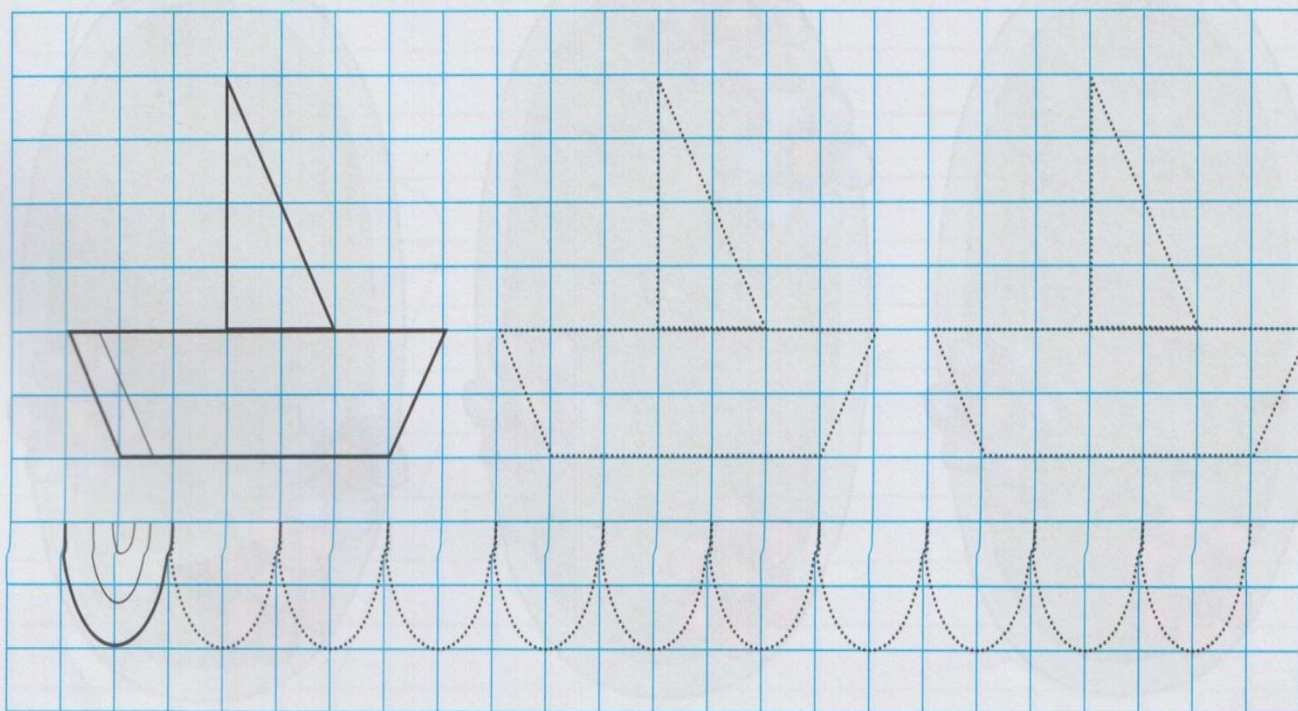


# Сергіту сәті

*«Көңілді күн»*



9 9 9 9 9 9 10 10 10 10







**Назарларыңызға  
рахмет**