


Число и цифра 5. Состав числа 5.  
Сложение и вычитание  
в пределах 5.  
Пятиугольник.  
(стр. 40, № 1, 2, 3, 4; стр. 41, № 5, 6, 7)



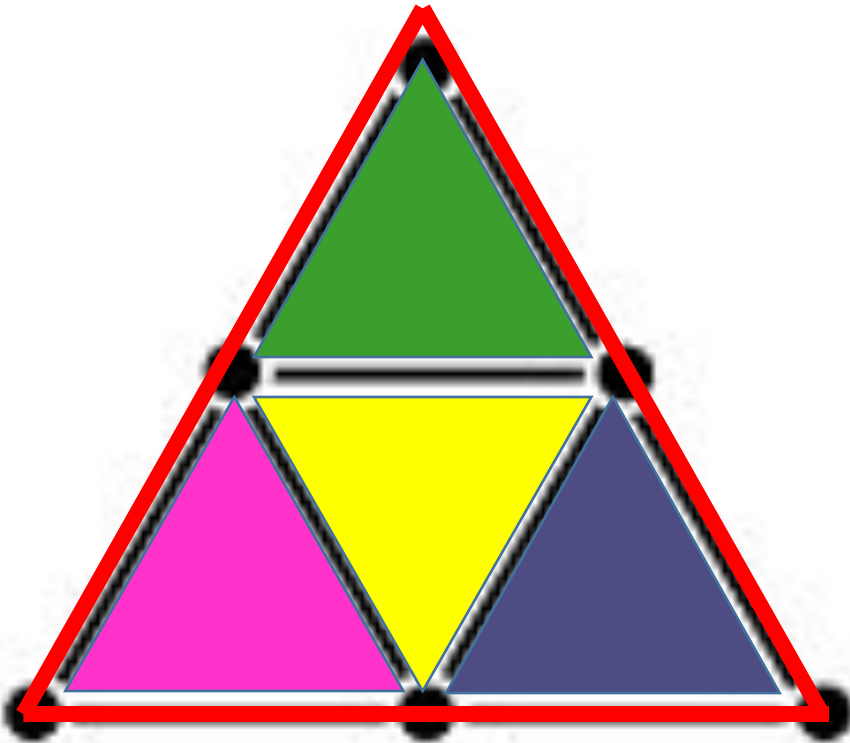
Математика, 1 класс, 1 часть  
Л.Г. Петерсон

Составьте такую  
фигуру.

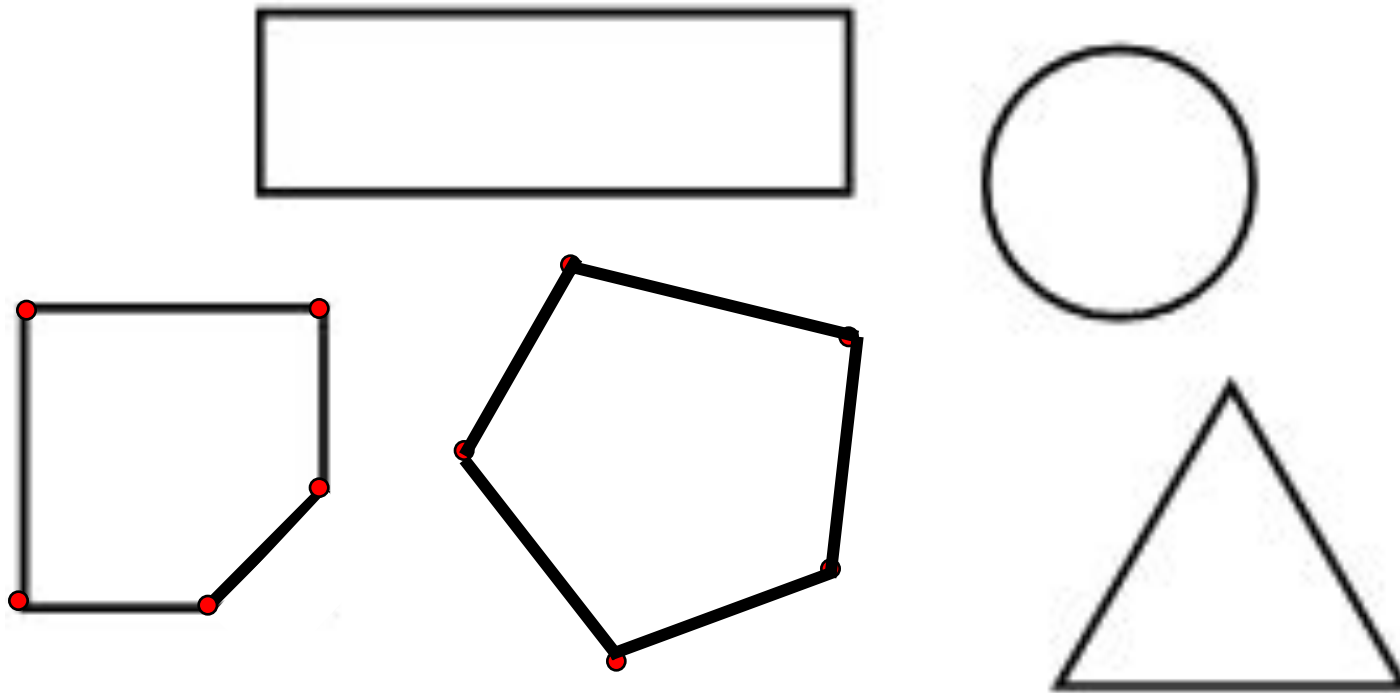
Сколько всего  
треугольников  
получилось?

Какие ещё фигуры  
увидели?

Сколько палочек  
понадобилось?



Что общего в рисунках?



Постройте в центре пятиугольник.  
Как это сделать?

Подумайте, как получить пятиугольник из  
четырёхугольника.


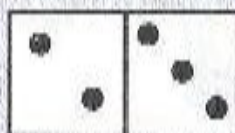

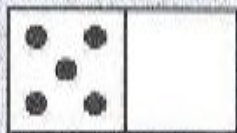
1

2

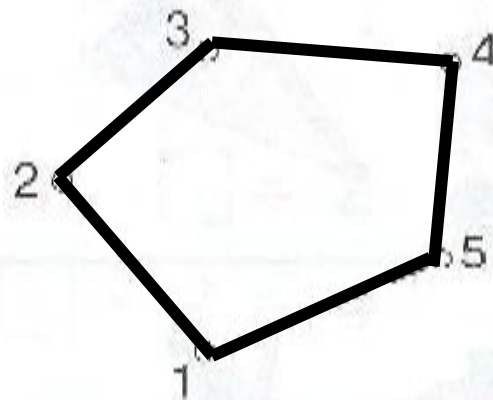
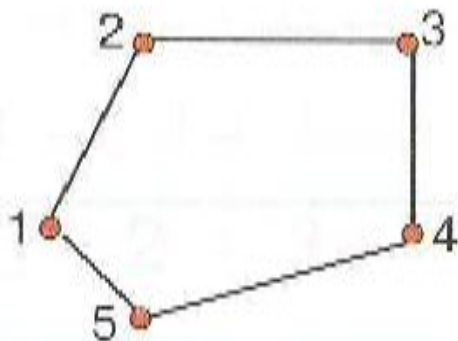
3

4

5





# 1 Пятиугольник





# На что похожа цифра 5?





Каких предметов всегда по 5?



2



3


1		•
2		••
3		•••
4		••••
5		•••••

4

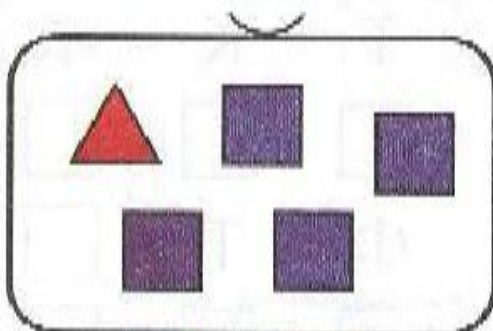
1 2 3 4 5	<del>1</del> <del>2</del> <del>3</del> <del>4</del> <del>5</del>	1 2 3 4 5	<del>1</del> <del>2</del> <del>3</del> <del>4</del> <del>5</del>	<del>1</del> <del>2</del> <del>3</del> <del>4</del> <del>5</del>




5) Сделай рисунки и запиши выражение:



$$2 + 3$$

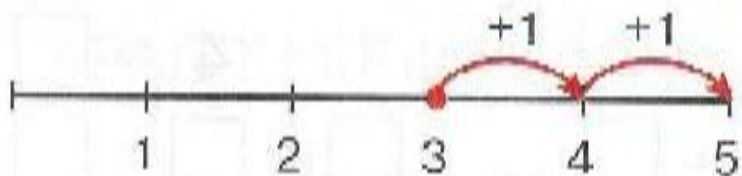


$$1 + 4$$

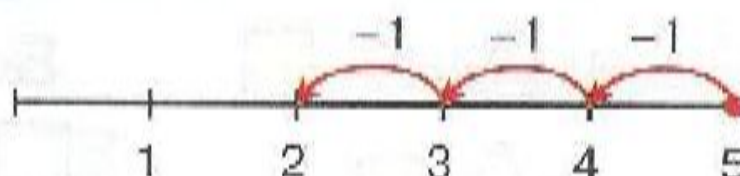


$$2 + 2 + 1$$

6) Сколько единиц присчитали? Сколько отсчитали?



$$3 + 2 = 5$$



$$5 - 3 = 2$$



7 Составь по рисунку пример и запиши ответ.

1 + 4

3 + 2

2 + 1 + 2

The first row shows one apple being placed into a bowl on the left and four apples being placed into a bowl on the right. The second row shows three apples being placed into a bowl on the left and two apples being placed into a bowl on the right. The third row shows two apples being placed into a bowl on the left, one apple being placed into a smaller bowl in the middle, and two apples being placed into a bowl on the right.



3 + 2

2 + 3

1 + 2 + 2

The first row shows three apples being placed into a bowl on the left and two apples being placed into a bowl on the right. The second row shows two apples being placed into a bowl on the left and three apples being placed into a bowl on the right. The third row shows one apple being placed into a small bowl on the left, two apples being placed into a medium bowl in the middle, and two apples being placed into a bowl on the right.

## Состав числа 5



$$5 = 1 + 4$$



$$5 = 2 + 3$$



$$5 = 3 + 2$$



$$5 = 4 + 1$$

