



Интегрированный урок математики и английского языка

Geometric shapes 2 класс

Составила учитель начальных
классов и английского языка
гимназии №20
имени Абдуллы Алиша г.Казани
Минимуллина А.Х





2015 г

What is the next number?



23,34,45,.....


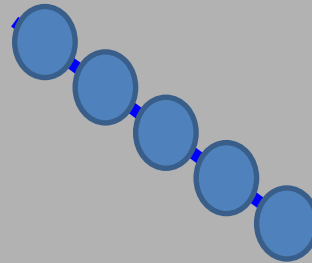




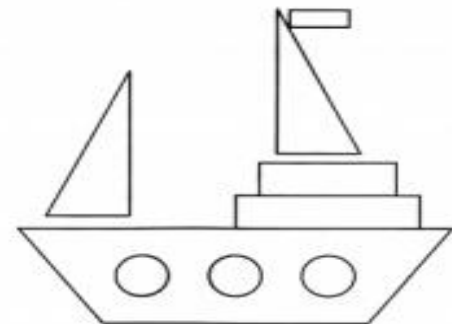
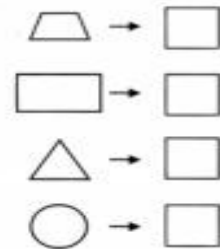
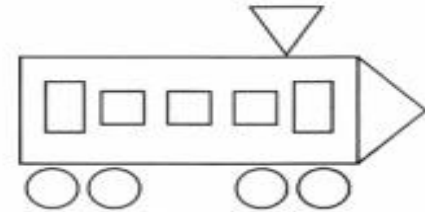
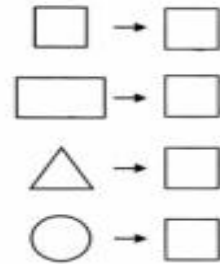
What geometric shapes do you see?
What colour are they?



The main geometric shape
is a point



How many circles
(squares, triangles,
rectangles)?



Find the length of the sides of this rectangle



Let's have a rest.



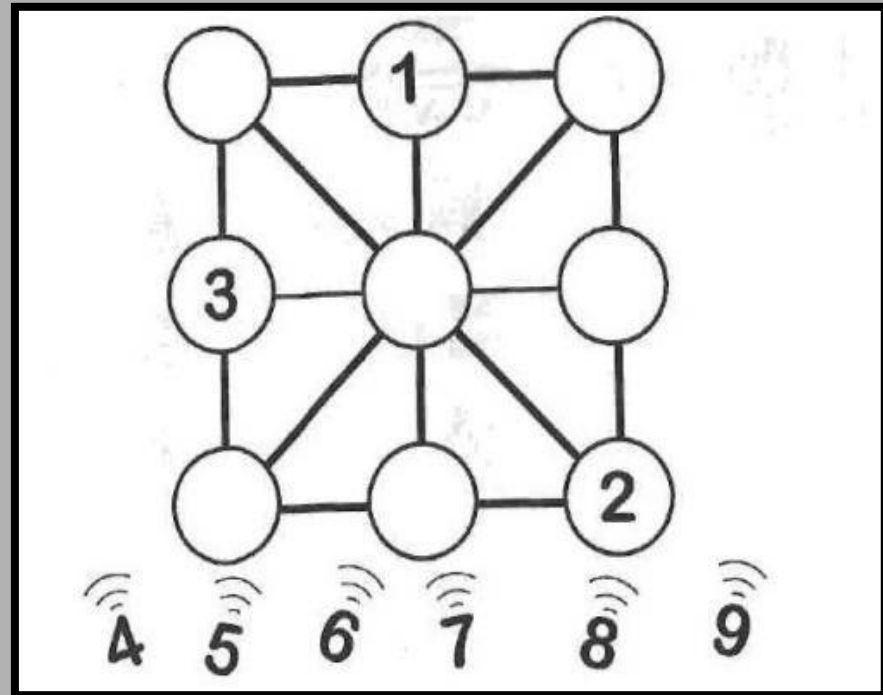


Lena has got 17 balloons.
Masha has got 6 balloons
more than Lena. How many
balloons has Marsha got?
How many balloons have
they got?



Let's play.

What number is in the middle of the square?





Homework



Draw a square
KLMN $KL = 7 \text{ cm}$