

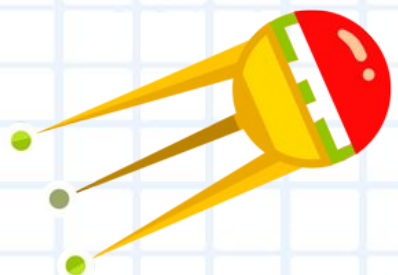

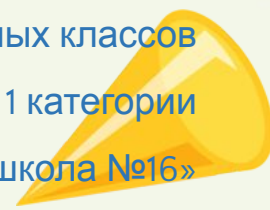
# Математические законы

Проверь свои знания


Выполнила  
учитель начальных классов  
1 категории  
МБОУ «Средняя школа №16»  
г. Дзержинска Нижегородской области

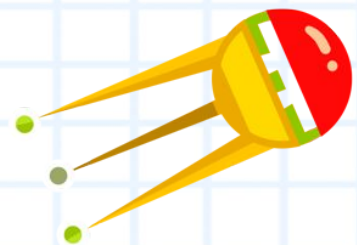


$$a^2 + b^2 = c^2$$




$$x + y = z$$






$$x + y = z$$



$$15 + 27 + 35 =$$




$$a^2 + b^2 = c^2$$

<input type="checkbox"/>	77
<input type="checkbox"/>	67
<input type="checkbox"/>	87

$$x + y = z$$

$$9 + 18 + 51 =$$




$$a^2 + b^2 = c^2$$

<input type="checkbox"/>	68
<input type="checkbox"/>	78
<input type="checkbox"/>	884

$$x + y = z$$


$$320 + 57 + 80 =$$



- 447
- 357
- 457

$$x + y = z$$

$$7 * 4 * 5 =$$




$$a^2 + b^2 = c^2$$

<input type="checkbox"/>	8
<input type="checkbox"/>	140
<input type="checkbox"/>	100

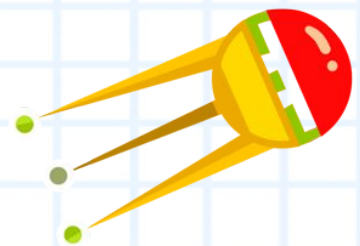
$$x + y = z$$

$$5 * 70 * 8 =$$




$$a^2 + b^2 = c^2$$





<input type="checkbox"/>	28
<input type="checkbox"/>	2800
<input type="checkbox"/>	280



$$x + y = z$$



$$8 + 72 =$$




$$a^2 + b^2 = c^2$$



<input type="text"/>	80
<input type="text"/>	70
<input type="text"/>	90

$$x + y = z$$

$$(42 + 38) * 3 =$$




- 270
- 240
- 27



$$x + y = z$$

$$(36 + 40) : 4 =$$




$$a^2 + b^2 = c^2$$

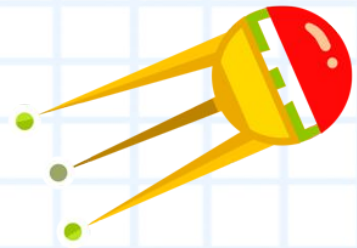
<input type="text"/>	180
<input type="text"/>	18
<input type="text"/>	19

$$x + y = z$$


$$6 * (50 + 7) =$$



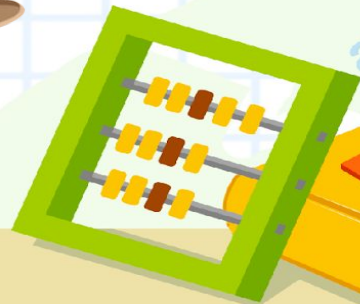


- 37
- 342
- 307




$$x + y = z$$



$$42 * 3 =$$




$$a^2 + b^2 = c^2$$



<input type="checkbox"/>	126
<input type="checkbox"/>	123
<input type="checkbox"/>	18


$$x + y = z$$

$$17 * 3 + 20 * 5 =$$



- 141
- 355
- 151

МОЛОДЕЦ!



$$x + y = z$$

Использованы материалы сайта

1.

<https://templates.office.com/ru-ru/%D0%A8%D0%B0%D0%B1%D0%BB%D0%BE%D0%B9-%D1%82%D0%B5%D1%81%D1%82%D0%B0-%D0%BF%D0%BE-%D0%BC%D0%B0%D1%82%D0%B5%D0%BC%D0%B0%D1%82%D0%B8%D0%BA%D0%B5-%D1%81-%D1%83%D0%BC%D0%BD%D0%BE%D0%B9-%D1%81%D0%B2%D0%BE%D0%B9-TM96391487>

