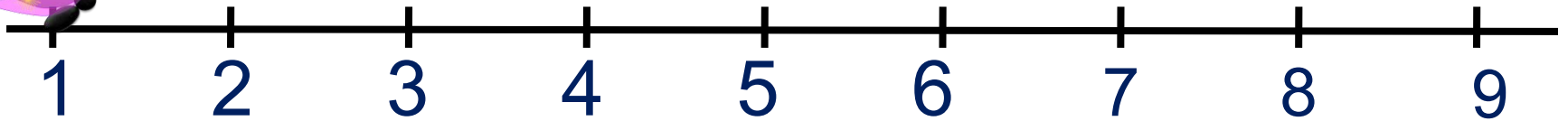


СОСТАВЬТЕ РАВЕНСТВА.



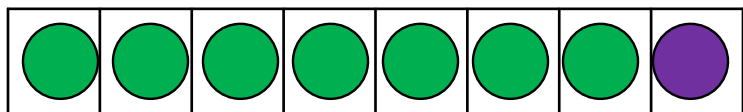
$$1 + 2 = 3$$

$$3 + 2 = 5$$

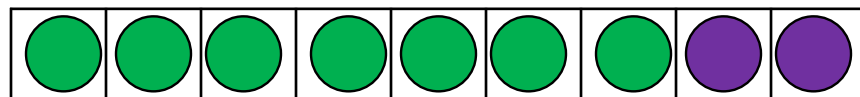
$$5 + 2 = 7$$

$$7 + 2 = 9$$

1. Запишите выражения в тетрадь к моделям и сравните их значения




$$7 + 1$$

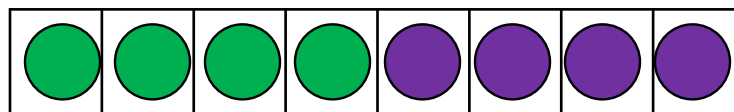


$$7 + 2$$





$$+ 3$$



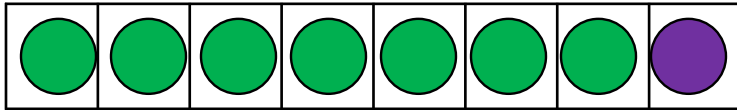
$$+ 3$$




1 2 3 4 5 6 7 8




Запишите выражения в тетрадь к моделям и сравните их значения

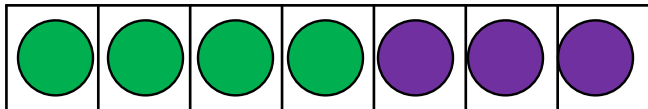


$$7 + 1$$



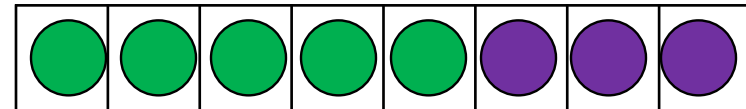


$$7 + 2$$



$$+ 3$$







$$+ 3$$

1 2 3 4 5 6 7 8 9



**ПРОВЕРЬ!**

Запишите выражения в тетрадь к моделям и сравните их значения



$4 + \square$


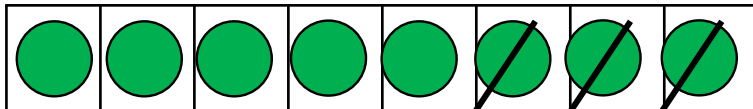
$\square$

$5 + \square$

$\square$

$\square$

$\square$



$- 3$

$\square$

$- 3$

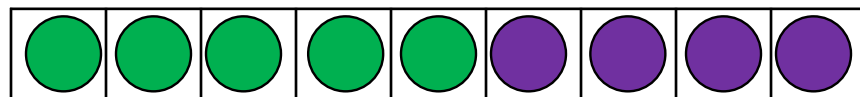

$\square$

$\square$

$\square$

1 2 3 4 5 6 7 8 9 > = <

Запишите выражения в тетрадь к моделям и сравните их значения


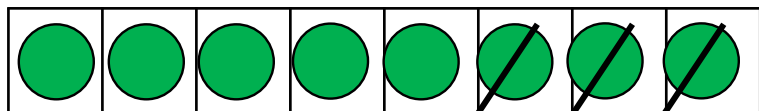


$$4 + \square$$

=

$$5 + \square$$





$$\square - 3$$

<

$$\square - 3$$

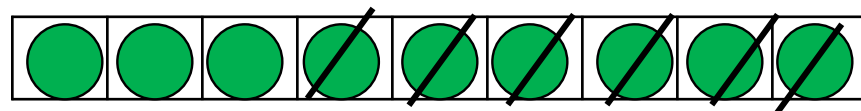
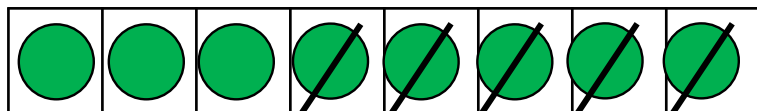
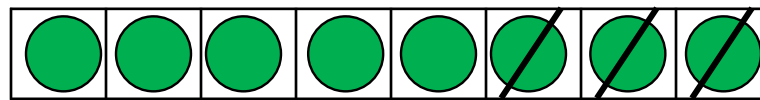
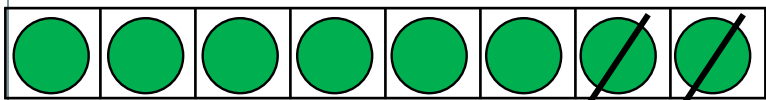



1 2 3 4 5 6 7 8 9

> = <

**ПРОВЕРЬ!**

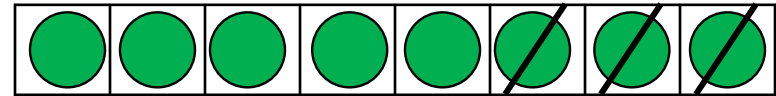
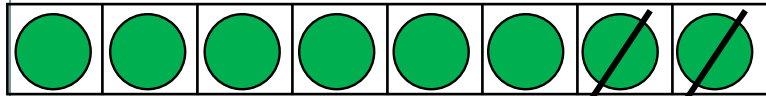
Запишите выражения в тетрадь к моделям и сравните их значения



1 2 3 4 5 6 7 8 9



Запишите выражения в тетрадь к моделям и сравните их значения



$\square -$

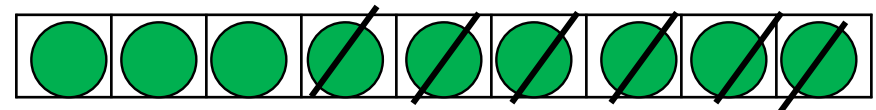
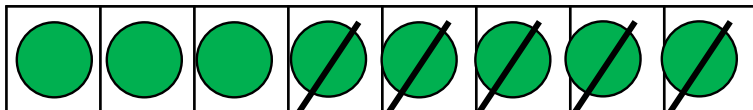


$\square -$

$\square$

$\square$

$\square$



$\square -$



$\square -$

$\square$

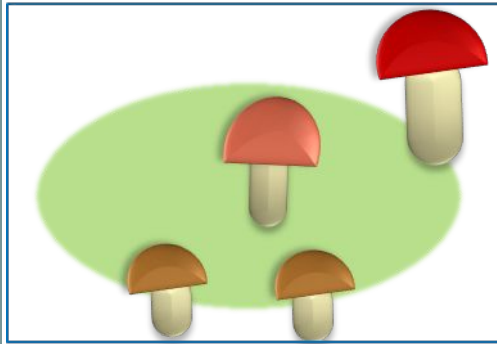
$\square$

$\square$


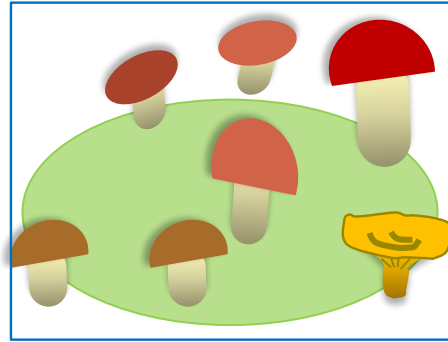
1 2 3 4 5 6 7 8 9





**ПРОВЕРЬ!**



+ 3



- 2



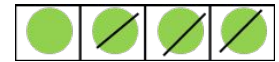
- 3



$4 - 3$



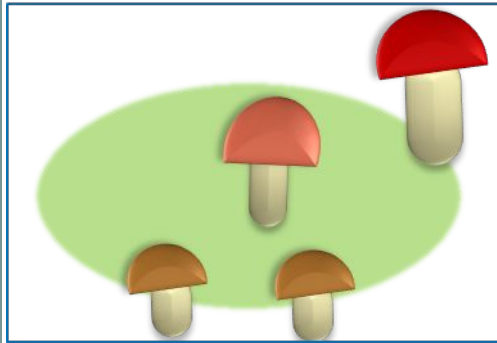
$4 + 3$




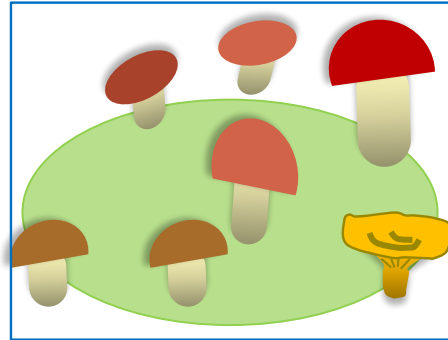
$7 - 2$




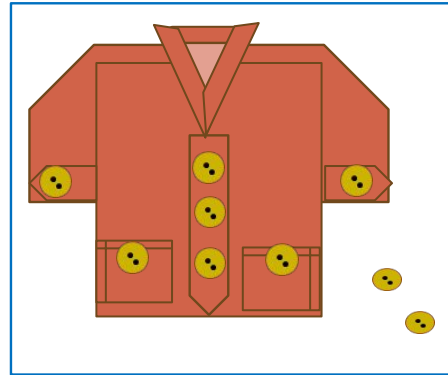





+ 3



- 2



- 3

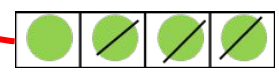


$4 - 3$

$4 + 3$

$7 - 2$

**ПРОВЕРЬ!**



*Спасибо!*