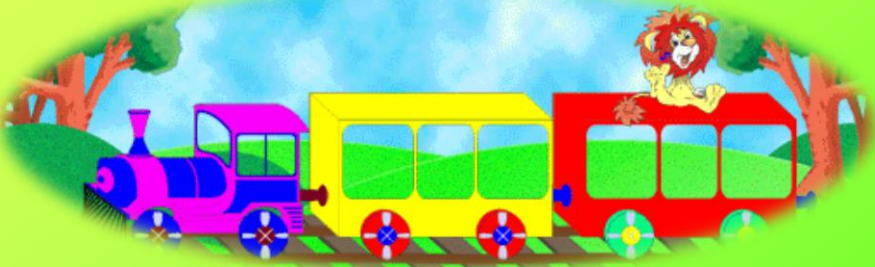


Кому: «Детский сад с.Яныль»
подготовительной группе №1
От кого: Феи математики



Кадерле балалар! Сезнең төркемгә бик акыллы, зирәк балалар йөри . Тиздән мәктәпкә барырга жыенасыз икән. Минем сезнең белән танышасым һәм кунакка чакырасым килә. Минем янга килеп җиткәнче, бик кызыклы эчтәлекле биремнәр очрар. Шул биремнәрне үтәсәгез минем янга бик тиз килеп җитәрсез.

УҢЫШЛАР СЕЗГӘ!



9

5

10

1

2

8

3

7

4

6

A red balloon with the number 1 in black text.

1

A green balloon with the number 2 in black text.

2

A blue balloon with the number 3 in black text.

3

A red balloon with the number 4 in black text.

4

A blue balloon with the number 5 in black text.

5

A green balloon with the number 6 in black text.

6

An orange balloon with the number 7 in black text.

7

An orange balloon with the number 8 in black text.


8


A green balloon with the number 9 in black text.

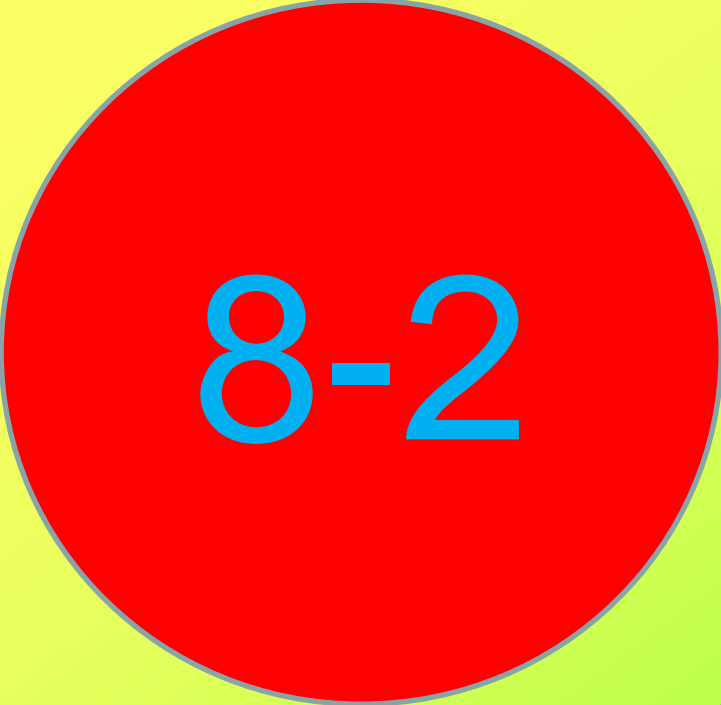
9

An orange balloon with the number 10 in black text.


10






A large red circle with a thin grey border, containing the subtraction equation 8-2 in blue text.
$$8-2$$

A large yellow equilateral triangle with a thin grey border, containing the subtraction equation 9-1 in green text.
$$9-1$$

A large green rectangle with a thin grey border, containing the subtraction equation 10-5 in yellow text.
$$10-5$$

A large blue oval with a thin grey border, containing the subtraction equation 7-1 in white text.
$$7-1$$





5



8



10



1




3



4





Нинди геометрик фигура житми?

