



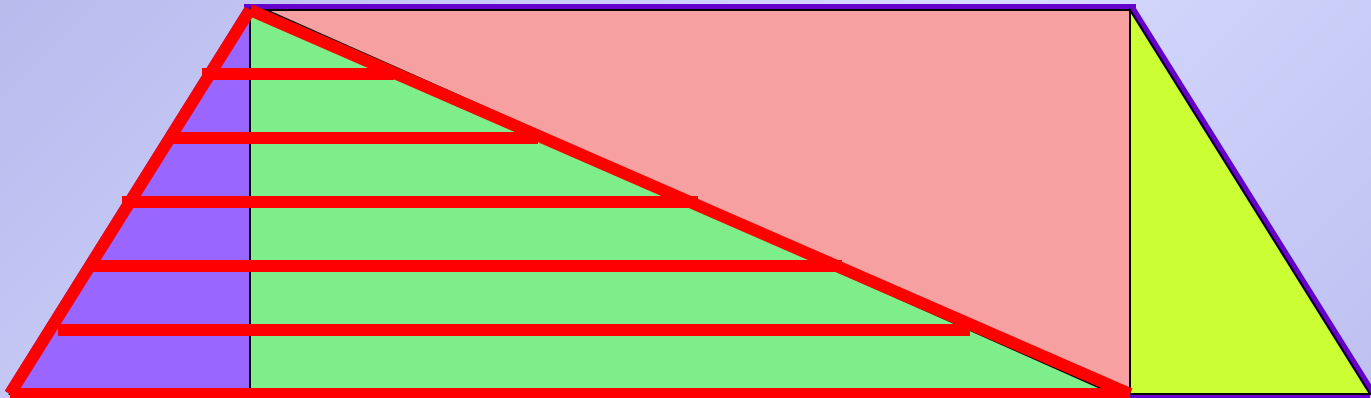
**Число 0.  
Цифра 0.**

**Свойства сложения и  
вычитания с нулём.**

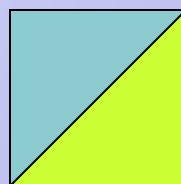

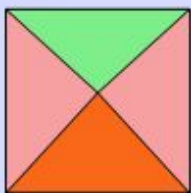
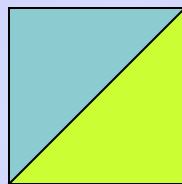

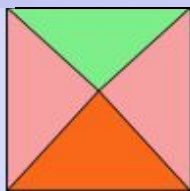
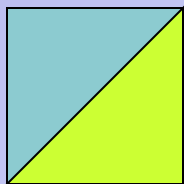

**Автор: учитель начальных классов ГБОУ гимназии № 402  
Степанченко Марина Валериевна**












*Сколько треугольников?*



*Какая фигура будет следующей?*



*Какой фигуры не хватает?*





*Число 0.*

*Цифра 0.*

*Свойства сложения и  
вычитания с нулём.*





# *Сложение с нулём*

$$a + 0 = a$$

$$0 + a = a$$



# *Вычитание с нулём*

$$a - 0 = a$$

$$a - a = 0$$

$$5 + \boxed{4} = 9$$

$$\boxed{9} - 3 = 6$$

$$4 + \boxed{4} = 8$$

$$7 - \boxed{4} = 3$$

$$\boxed{5} + 2 = 7$$

$$9 - \boxed{8} = 1$$

$$\boxed{3} + 5 = 8$$

$$6 - \boxed{2} = 4$$

$$\boxed{7} - 2 = 5$$

$$5 + \boxed{4} = 9$$

$$6 - \boxed{0} = 6$$

$$\boxed{7} - 2 = 5$$

$$\boxed{0} + 8 = 8$$

$$\boxed{3} + 5 = 8$$

$$\boxed{3} - 3 = 0$$