




«Состав числа 10»






10

9

8

9	
	7
4	
	5
8	

7		6	
	8		5
	5	4	
6			7





10


1	
	3
6	
	5
2	

9

2	
	1
	4
3	

8

2	
	3
4	
	1





7


1	
	2
3	
	4

6

1	
	2
3	

5

1	
	2





7

6

5

6

5

5

4


4

4

3

3

4





3

2

2

1

3

2

4

3

2