

36

$40+8$

63

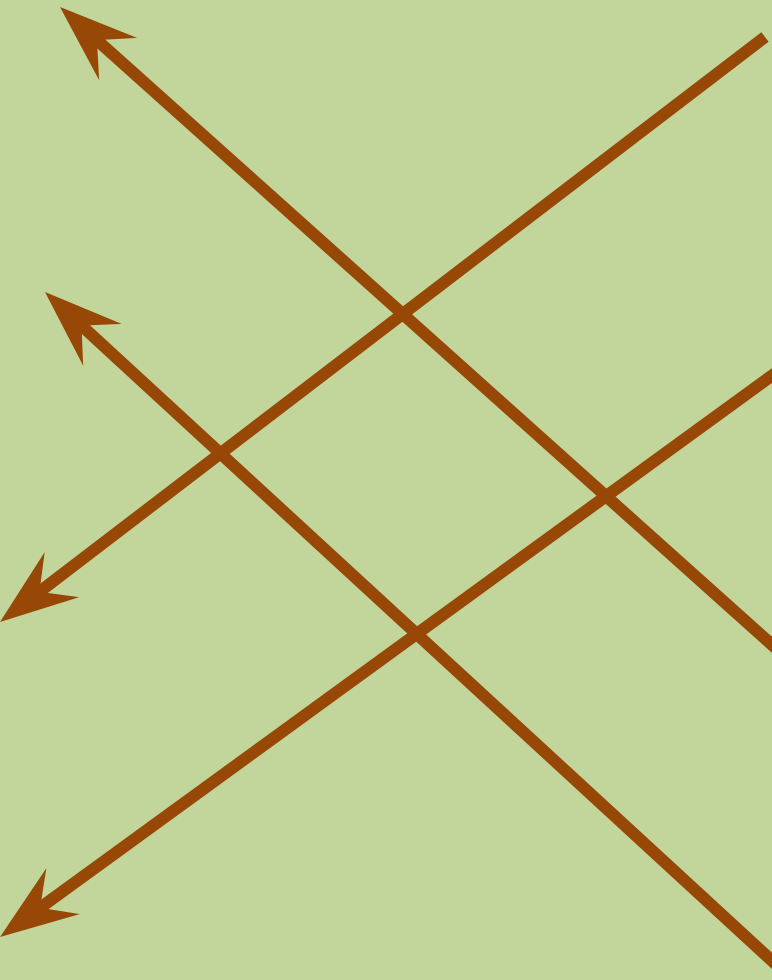
$80+4$

48

$30+6$

84

$60+3$



$20+30$

$80-40$

$20+20$

$70-20$

$10+40$

$90-30$

$60-20$

$40+10$

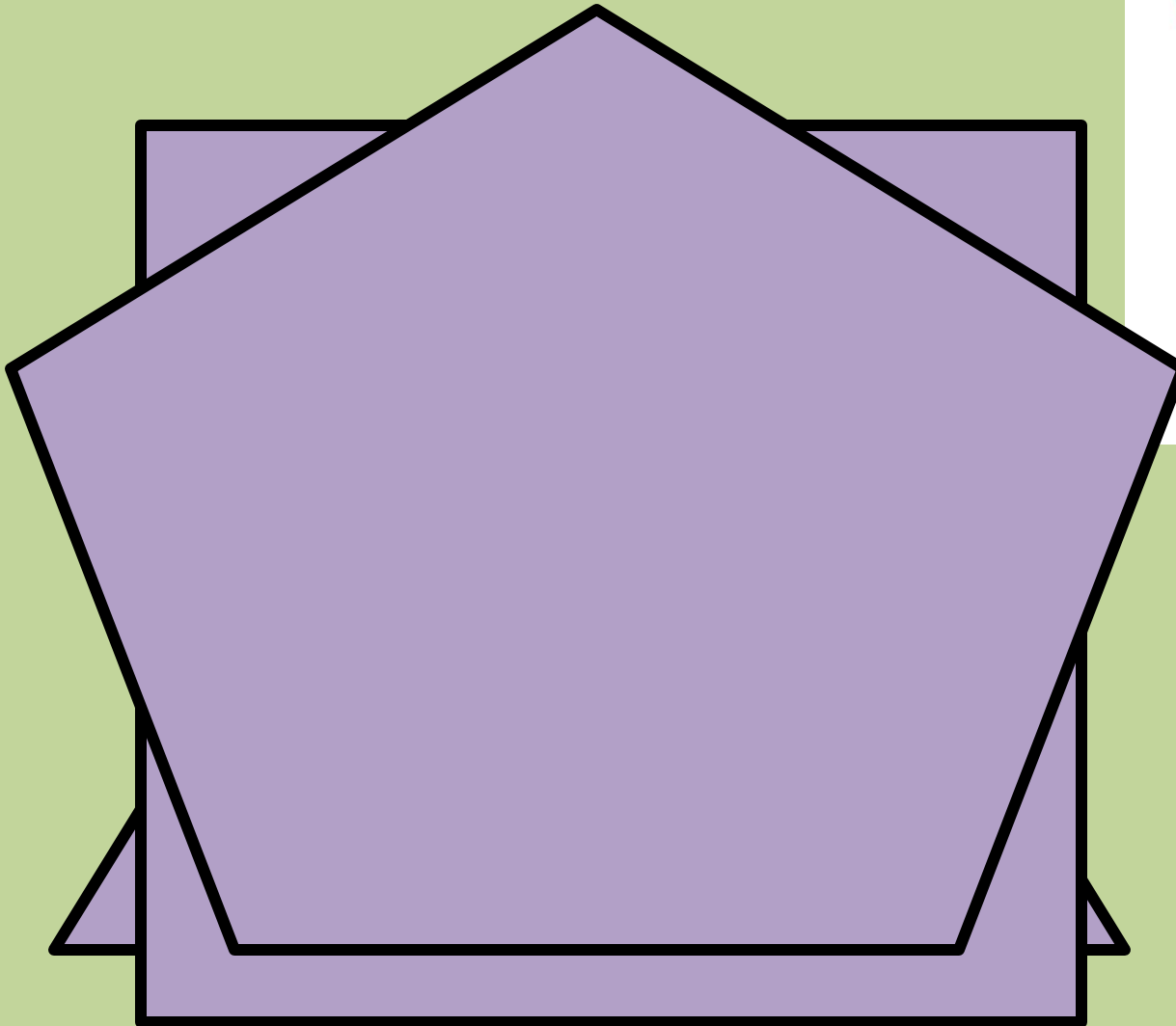
$30+20$

$70-30$

$40+20$

$90-40$

Из скольких отрезков состоит
фигура?



$$5 * 4 \rightarrow 5 + 5 + 5$$

$$8 * 3 \leftarrow 4 * 8$$

$$10 * 5 = 5 * 10$$

1 Вариант	2 Вариант
$9+6-8=7$	$7+5-6=6$
$32-(24+6)=2$	$49-(33+6)=10$
$28+37+2+3=70$	$64+18+2+6=90$

$10*2=20$

$2*10=20$

$20:2=10$

$20:10=2$

$10*3=30$

$3*10=30$

$30:3=10$

$30:10=3$

$10*4=40$

$4*10=40$

$40:4=10$

$40:10=4$

$10*5=50$

$5*10=50$

$50:5=10$

$50:10=5$

$10*6=60$

$6*10=60$

$60:6=10$

$60:10=6$

$10*7=70$

$7*10=70$

$70:7=10$

$70:10=7$

$10*8=80$

$8*10=80$

$80:8=10$

$80:10=8$

$10*9=90$

$9*10=90$

$90:9=10$

$90:10=9$

$10*10=100$

$10*10=100$


$100:10=10$

$100:10=10$

Слышал краем уха



Шевелил мозгами.



Считал ворон.

