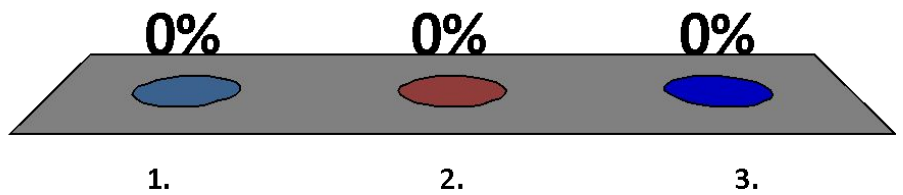


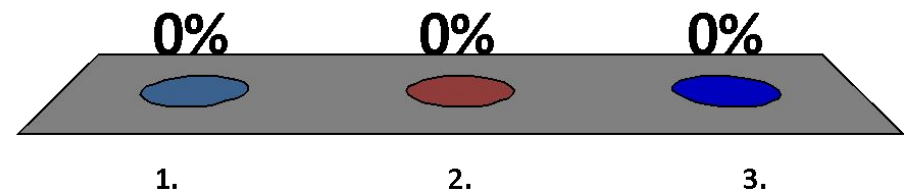
$$5+5=$$

1. 5
2. 10
3. 8



$$1+9=$$

1. 9
2. 10
3. 8

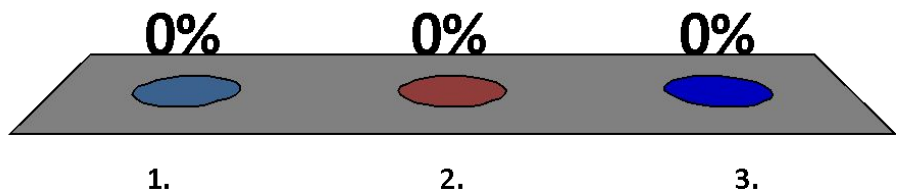


$$4+3=$$

1. 6

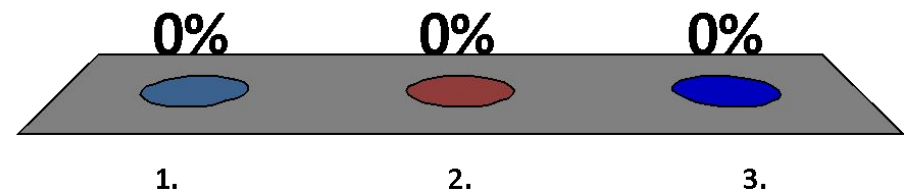
2. 8

3. 7



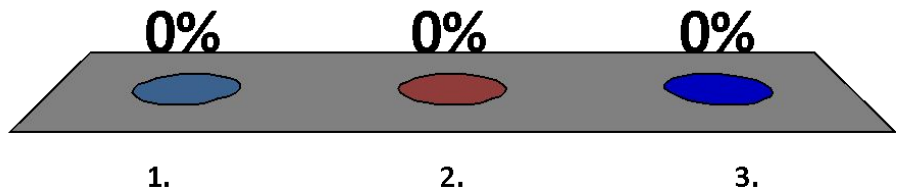
$$3+2=$$

1. 6
2. 5
3. 4



$$6+2=$$

1. 9
2. 7
3. 8

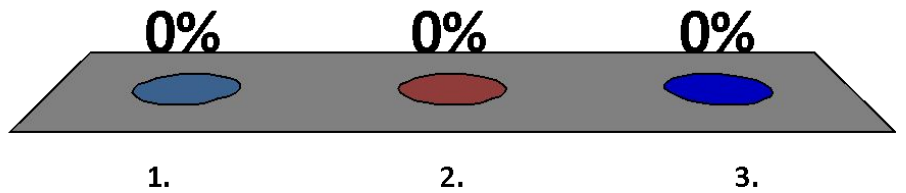


$$2+6=$$

1. 9

2. 8

3. 7

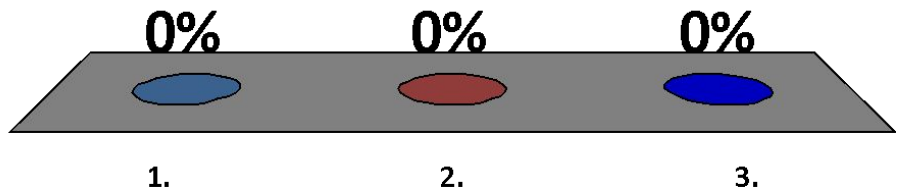


$$6+3=$$

1. 9

2. 7

3. 8

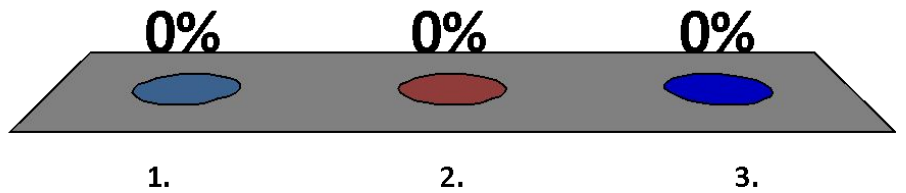


$$4+4=$$

1. 7

2. 9

3. 8



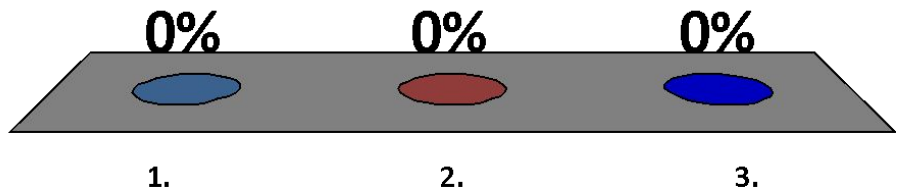


$$3+1=$$

1. 4

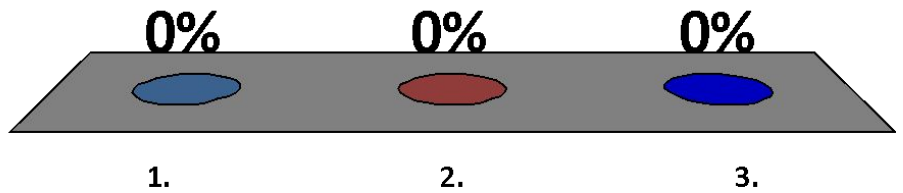
2. 5

3. 3



$$2+4=$$

1. 5
2. 6
3. 7



$$1+6=$$

1. 6

2. 8

3. 7

