



# Выражения

## 2 класс

*Чижова И.В.  
МБОУ гимназия  
Г. Узловая  
Тульской области*

**Начать тест**



**Верно: 17**  
**Ошибки: 1**  
**Отметка: 4**

**Время: 2 мин. 9**  
**сек.**

**исправить**

**ещё**


A vibrant cartoon illustration of a scene. On the left, a blue bird with a yellow beak and a pink bow sits on a tree branch. In the bottom left, a pink pig with a flower crown stands in a field. In the bottom right, a blue rabbit with long ears is running, holding a pink ice cream cone with a bee on top. A bright sun with a face is in the top right corner. The background is a blue sky with white clouds.

**Сумму чисел 10 и 6  
разделить на 8**

$$10 + 6 : 8$$

$$10 + (6 : 8)$$

$$(10 + 6) : 8$$




Произведение  
чисел 9 и 5  
увеличить на 6

$$9 \cdot 5 \cdot 6$$

$$9 \cdot 5 + 6$$

$$9 \cdot (5 + 6)$$

A vibrant, cartoon-style illustration of a landscape. On the left, a blue bird with a yellow beak and a pink bow sits on a tree branch. Below it, a pink pig with a flower crown stands in a field of white flowers. In the bottom right, a blue rabbit with long ears is running, holding a pink ice cream cone with a bee on top. The background features a bright sun with a face, a blue sky with white clouds, and a purple body of water with dark rocks.

**Разность чисел 80 и 34  
уменьшить на 46**

$$80 - (34 - 46)$$

$$80 - 34 - 46$$

$$(80 - 34) - 46$$



Из суммы чисел  
70 и 13 вычесть 53

$$(70 + 13) - 53$$

$$70 + (13 - 53)$$

$$70 + 13 - 53$$




**75 уменьшить на  
разность чисел 27 и 8**

$$(75 - 27) - 8$$

$$75 - 27 - 8$$

$$75 - (27 - 8)$$



**Сумму чисел 11 и 16  
уменьшить в 9 раз**

$$11 + 16 : 9$$

$$(11 + 16) : 9$$

$$11 + (16 : 9)$$



A vibrant cartoon illustration of a scene. On the left, a blue bird with a yellow beak and a pink bow sits on a tree branch. Below it, a pink pig with a flower crown stands in a grassy field. On the right, a blue rabbit with long ears is running, holding a pink ice cream cone with a bee on top. In the top right corner, a smiling sun with rays is visible against a blue sky with white clouds. The entire scene is framed by a white border with a scalloped edge.

Сравни.

$$34 - 7 * 70 - 42$$

<

>

=



Сравни.

$$45 - 9 * 10 + 20 + 8$$

=

>

<

A vibrant cartoon illustration of a scene. On the left, a blue bird with a yellow beak and a pink bow sits on a tree branch. Below it, a pink pig with a flower crown stands in a grassy field. On the right, a blue rabbit with long ears is running, holding a pink ice cream cone. A small bee is flying nearby. In the top right corner, a smiling sun with rays is shining. The background is a bright blue sky with white clouds.

Сравни.

$$18 + 8 * 56 - 40$$

>

<

=

A vibrant cartoon illustration of a scene. On the left, a blue bird with a yellow beak and a pink bow sits on a tree branch. Below it, a pink pig with a flower crown stands in a grassy area. On the right, a blue rabbit with long ears is running, holding a pink ice cream cone. A small bee is flying nearby. In the top right corner, a smiling sun with rays is shining. The background is a bright blue sky with white clouds.

Сравни.

$80 - 60 - 14 * 45 - 30 - 10$

$>$

$=$

$<$

A vibrant cartoon illustration of a scene. On the left, a blue bird with a yellow beak and a pink bow sits on a tree branch. Below it, a pink pig with a flower crown stands in a field. On the right, a blue rabbit with long ears is running, holding a pink ice cream cone. A small bee is flying nearby. In the top right corner, a smiling sun with a face is shining. The background is a bright blue sky with white clouds.

Сравни.

$$34 + 8 * 38 + 4$$

>

=

<



Сравни.

$$55 + 7 * 67 - 8$$

>

<

=



Сравни.

$$16 + 9 \cdot 4 * 10 + 36 : 4$$

=

<

>



Сравни.


$$(13 + 5) : 9 * 5 + (13 - 11)$$

<

=

>






До встречи с Медведем  
Колобок прокатился по  
деревне 88 м, а до встречи с  
Лисой – ещё 7 м. На ск. метров  
Колобок удалился от дома?

95 м

85 м

81 м




Антон рассортировал коллекцию марок. Оказалось, что марок с животными 8 штук, а марок с машинами 22 штуки. На ск. меньше марок с животными?

16

30

14



На клумбе росло 37 астр.  
Когда несколько астр  
сорвали, осталось 28  
астр. Ск. астр сорвали?

9

65

19