



1	2
2	1



1	4
2	3
4	1
3	2








2	2
3	1
1	3

$$2 + \boxed{2} = 4$$

$$1 + \boxed{4} = 5$$

$$4 - \boxed{3} = 1$$

$$5 - \boxed{3} = 2$$



?



