

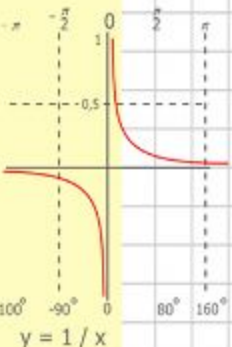
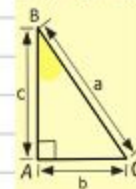
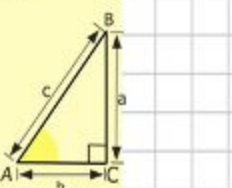
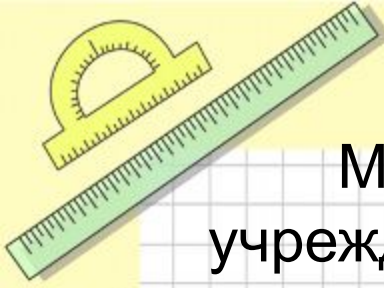
Математик

Муниципальное казенное общеобразовательное учреждение Сайдыпская основная общеобразовательная школа.

Устный счет на уроках математики в 5 классе

Учитель математики
МКОУ Сайдыпская ООШ
Николаев Василий
Николаевич

с. Сайдып 2012 год.



$$\begin{array}{r} 2500 \\ \times 42 \\ \hline 2100 \\ + 8400 \\ \hline 105000 \end{array}$$

- 2 x 2 = 4
- 3 x 3 = 9
- 4 x 4 = 16
- 5 x 5 = 25
- 6 x 6 = 36
- 7 x 7 = 49
- 8 x 8 = 64



$$\frac{a}{\sin A} = \frac{b}{\sin B} = \frac{c}{\sin C}$$

$$\frac{a}{c} + \frac{b}{c} = \frac{a+b}{c}$$



$$\sin 90^\circ = 1$$



$$\begin{cases} y = \sin 90 \\ x = 25y + 45 \end{cases}$$
$$\begin{cases} y = 1 \\ x = 25 + 45 \\ x = 70 \end{cases}$$



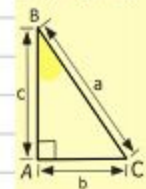
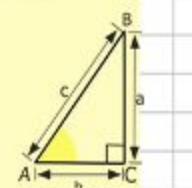
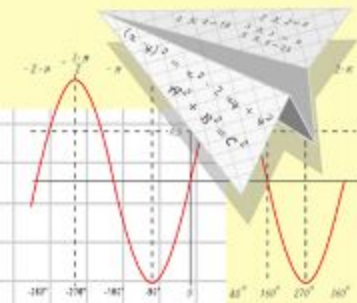
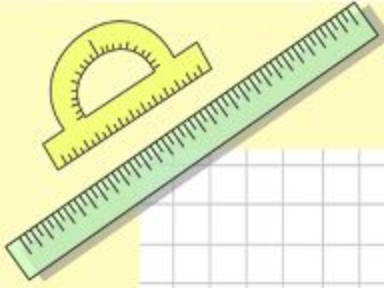
$$(x+y)(x-y) = x^2 - y^2$$



Математик


а Актуализация

Устный счет на уроках математики является способом направленного и всестороннего развития способностей детей. Систематическое выполнение устных упражнений позволяет восстанавливать, поддерживать и умножать природные способности к восприятию, запоминанию и обработке информации, способствует поддержанию и укреплению всей умственной работоспособности, организованности, целеустремленности. Я использую возможности устного счета для развития математических способностей учащихся пятого класса.



$$\begin{array}{r} 2500 \\ \times 42 \\ \hline 2100 \\ + 8400 \\ \hline 105000 \end{array}$$

- 2 x 2 = 4
- 3 x 3 = 9
- 4 x 4 = 16
- 5 x 5 = 25
- 6 x 6 = 36
- 7 x 7 = 49
- 8 x 8 = 64



$$\frac{a}{\sin A} = \frac{b}{\sin B} = \frac{c}{\sin C}$$

$$\frac{a}{c} + \frac{b}{c} = \frac{a+b}{c}$$

$$\sin 90^\circ = 1$$

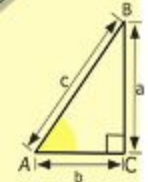
$$\begin{cases} y = \sin 90 \\ x = 25y + 45 \\ y = 1 \\ x = 25 + 45 \\ \hline x = 70 \end{cases}$$

$$(x+y)(x-y) = x^2 - y^2$$



Оглавление

- Чтение натуральных чисел.
- Действие с натуральными числами
- Шкалы и координаты
- Сравнение натуральных чисел
- Решение уравнений
- Умножение натуральных чисел
- Деление натуральных чисел
- Порядок выполнения действий
- Площадь прямоугольника
- Объем прямоугольного параллелепипеда
- Доли. Обыкновенные дроби
- Сравнение дробей
- Умножение и деление десятичных дробей на натуральные числа
- Умножение десятичных дробей
- Деление десятичных дробей
- Проценты



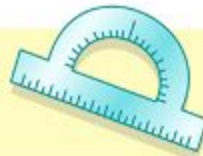
$$\begin{array}{r} \frac{1}{2} 500 \\ \times 42 \\ \hline 210 \\ + 84 \\ \hline 105000 \end{array}$$



$$\frac{a}{A} = \frac{b}{\sin B} = \frac{c}{\sin C}$$

$$\frac{a}{c} + \frac{b}{c} = \frac{a+b}{c}$$

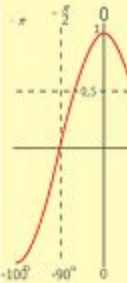
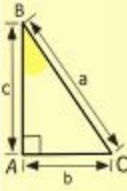
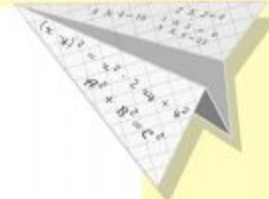
$$\sin 90^\circ = 1$$



$$\begin{cases} y = \sin 90 \\ x = 25y + 45 \end{cases}$$

$$\begin{cases} y = 1 \\ x = 25 + 45 \\ \hline x = 70 \end{cases}$$

$$(x+y)(x-y) = x^2 - y^2$$



$$y = \cos$$

$$\begin{array}{l} 2 \times 2 = 4 \\ 3 \times 3 = 9 \\ 4 \times 4 = 16 \\ 5 \times 5 = 25 \\ 6 \times 6 = 36 \\ 7 \times 7 = 49 \\ 8 \times 8 = 64 \\ 9 \times 9 = 81 \end{array}$$



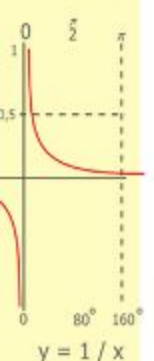
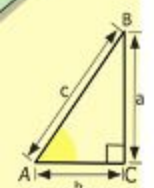

Чтение натуральных чисел

Прочитайте числа:

- 123 12
- 43 211
- 334 563 456
- 75 342 345
- 10 012
- 10 101 010
- 225 500 002
- 10 000 001

Запишите в тетради числами:

- Сто восемьдесят один.
- Восемь миллионов сорок пять.
- Триста восемь тысяч восемьдесят девять.
- Сорок миллионов девятьсот двадцать одна тысяча один.



$$\begin{array}{r} \frac{1}{2} 500 \\ \times 42 \\ \hline 210 \\ + 84 \\ \hline 10500 \end{array}$$




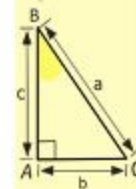

$$\frac{a}{\sin A} = \frac{b}{\sin B} = \frac{c}{\sin C}$$
$$\frac{a}{c} + \frac{b}{c} = \frac{a+b}{c}$$

$$\sin 90^\circ = 1$$



$$\begin{cases} y = \sin 90 \\ x = 25y + 45 \end{cases}$$
$$\begin{cases} y = 1 \\ x = 25 + 45 \\ \hline x = 70 \end{cases}$$

$$(x+y)(x-y) = x^2 - y^2$$

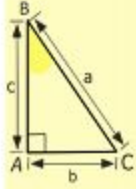
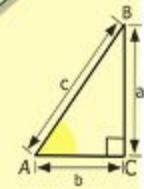

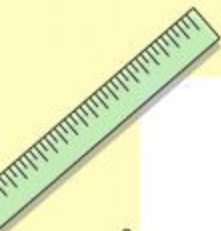



- 2 x 2 = 4
- 3 x 3 = 9
- 4 x 4 = 16
- 5 x 5 = 25
- 6 x 6 = 36
- 7 x 7 = 49
- 8 x 8 = 64
- 9 x 9 = 81



Действия с натуральными

числами



$$\begin{array}{r} 2500 \\ \times 42 \\ \hline 2100 \\ + 8400 \\ \hline 105000 \end{array}$$

- $2 \times 2 = 4$
- $3 \times 3 = 9$
- $4 \times 4 = 16$
- $5 \times 5 = 25$
- $6 \times 6 = 36$
- $7 \times 7 = 49$
- $8 \times 8 = 64$
- $9 \times 9 = 81$



$$\frac{a}{\sin A} = \frac{b}{\sin B} = \frac{c}{\sin C}$$

$$\frac{a}{c} + \frac{b}{c} = \frac{a+b}{c}$$

$$\sin 90^\circ = 1$$



$$\begin{cases} y = \sin 90 \\ x = 25y + 45 \end{cases}$$
$$\begin{cases} y = 1 \\ x = 25 + 45 \\ x = 70 \end{cases}$$

$$(x+y)(x-y) = x^2 - y^2$$



Шкалы и координаты

Выразите в сантиметрах:

$$2 \text{ м } 50 \text{ см} = 250 \text{ см}; \quad 2 \text{ м } 5 \text{ см} = 205 \text{ см};$$

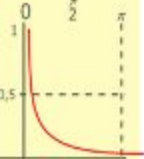
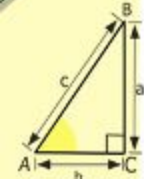
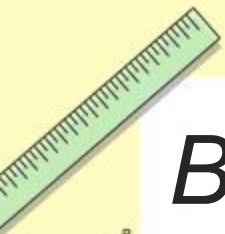
$$4 \text{ дм } 8 \text{ см} = 48 \text{ см}; \quad 460 \text{ мм} = 46 \text{ см};$$

Выразите в

метрах:

$$1 \text{ км } 600 \text{ м} = 1600 \text{ м}; \quad 4 \text{ км } 30 \text{ м} = 4030 \text{ м};$$

$$7 \text{ км } 5 \text{ м} = 7005 \text{ м}; \quad 3850 \text{ дм} = 385 \text{ м};$$



$$y = 1/x$$

$$\begin{array}{r} 2500 \\ \times 42 \\ \hline 2100 \\ + 840 \\ \hline 10500 \end{array}$$



$$\frac{a}{\sin A} = \frac{b}{\sin B} = \frac{c}{\sin C}$$

$$\frac{a}{c} + \frac{b}{c} = \frac{a+b}{c}$$

$$\sin 90^\circ = 1$$

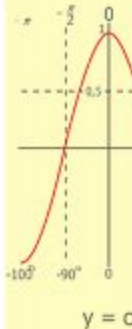
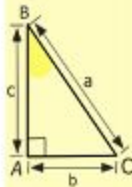



$$\begin{cases} y = \sin 90 \\ x = 25y + 45 \end{cases}$$

$$\begin{cases} y = 1 \\ x = 25 + 45 \end{cases}$$

$$x = 70$$

$$(x+y)(x-y) = x^2 - y^2$$



$$y = \cos$$

$$\begin{array}{l} 2 \times 2 = 4 \\ 3 \times 3 = 9 \\ 4 \times 4 = 16 \\ 5 \times 5 = 25 \\ 6 \times 6 = 36 \\ 7 \times 7 = 49 \\ 8 \times 8 = 64 \\ 9 \times 9 = 81 \end{array}$$



Шкалы и координаты

Какие числа соответствуют точкам на координатной шкале?

20

60

23

28

31

37

40

46

A

B

C

D

E

F

$$\begin{array}{r} 210 \\ + 84 \\ \hline 105000 \end{array}$$

$$\begin{array}{l} 2 \times 2 = 4 \\ 3 \times 3 = 9 \\ 4 \times 4 = 16 \\ 5 \times 5 = 25 \\ 6 \times 6 = 36 \\ 7 \times 7 = 49 \\ 8 \times 8 = 64 \\ 9 \times 9 = 81 \end{array}$$

$$\frac{a}{\sin A} = \frac{b}{\sin B} = \frac{c}{\sin C}$$

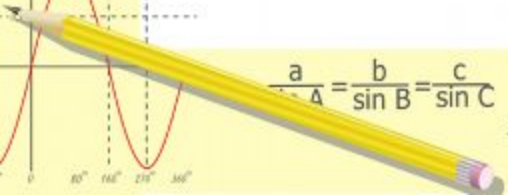
$$\frac{a}{c} + \frac{b}{c} = \frac{a+b}{c}$$

$$\sin 90^\circ = 1$$

$$\begin{cases} y = \sin 90 \\ x = 25y + 45 \end{cases}$$

$$\begin{cases} y = 1 \\ x = 25 + 45 \\ \hline x = 70 \end{cases}$$

$$(x+y)(x-y) = x^2 - y^2$$



Сравнение натуральных чисел

$$54 < 55$$

$$12\ 544 > 12\ 534$$

$$20\ 011\ 125 < 20\ 100\ 052$$

$$2\ 374 > 2\ 365$$

$$65\ 934 > 62\ 156$$

Назовите все числа, которые лежат между данными числами:

102

103

104

105

59958

59959

59960

59961



Решение уравнений

$$x^2 - 03 = 542$$

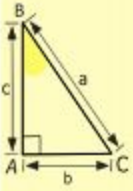
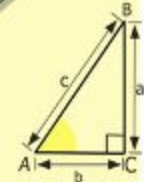
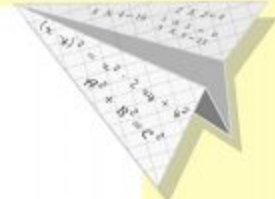

$$x = 24 \div 023$$

$$x = 95$$

$$x^2 - 13 = 3139$$

$$x = 939 \div 53110$$

$$x = 22$$



$$\begin{array}{r} 1 \\ 2500 \\ \times 42 \\ \hline 210 \\ + 84 \\ \hline 105000 \end{array}$$

- 2 x 2 = 4
- 3 x 3 = 9
- 4 x 4 = 16
- 5 x 5 = 25
- 6 x 6 = 36
- 7 x 7 = 49
- 8 x 8 = 64
- 9 x 9 = 81



$$\frac{a}{\sin A} = \frac{b}{\sin B} = \frac{c}{\sin C}$$

$$\frac{a}{c} + \frac{b}{c} = \frac{a+b}{c}$$

$$\sin 90^\circ = 1$$



$$\begin{cases} y = \sin 90 \\ x = 25y + 45 \end{cases}$$

$$\begin{cases} y = 1 \\ x = 25 + 45 \end{cases}$$

$$x = 70$$

$$(x+y)(x-y) = x^2 - y^2$$



Умножение натуральных чисел

Заполните таблицу:

Множитель		6	11	23		33	6
Множитель	8			4	2	3	
Произведение	96	54	55		18		138



$$\frac{a}{A} = \frac{b}{\sin B} = \frac{c}{\sin C}$$

$$\frac{a}{c} + \frac{b}{c} = \frac{a+b}{c}$$

$$\sin 90^\circ = 1$$



$$\begin{cases} y = \sin 90 \\ x = 25y + 45 \end{cases}$$

$$\begin{cases} y = 1 \\ x = 25 + 45 \end{cases}$$

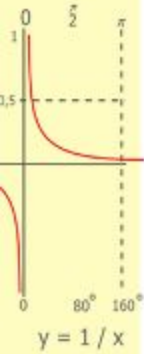
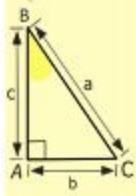
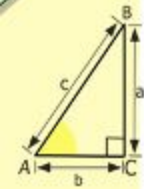

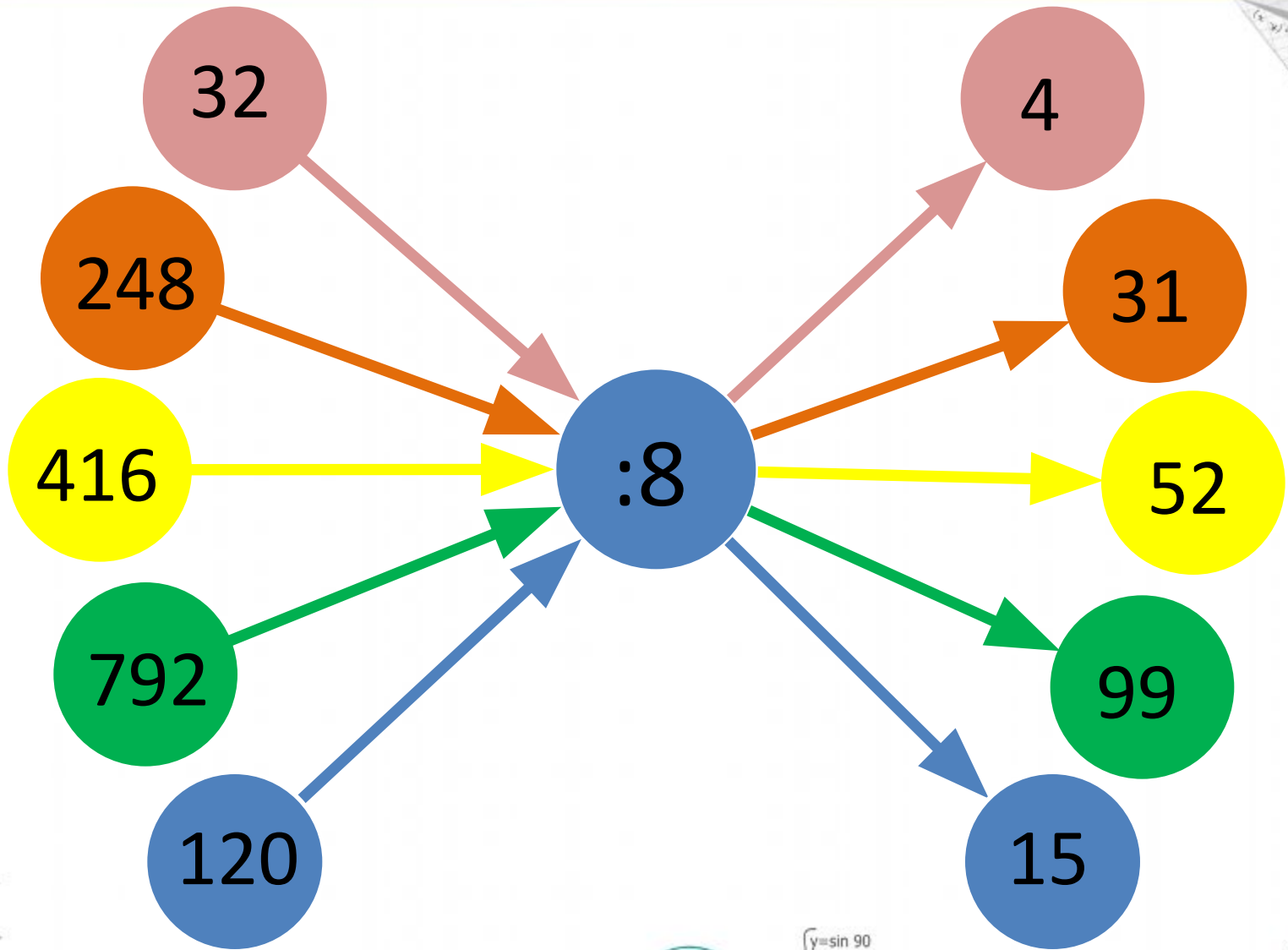
$$x = 70$$

$$(x+y)(x-y) = x^2 - y^2$$

$$\begin{aligned} 2 \times 2 &= 4 \\ 3 \times 3 &= 9 \\ 4 \times 4 &= 16 \\ 5 \times 5 &= 25 \\ 6 \times 6 &= 36 \\ 7 \times 7 &= 49 \\ 8 \times 8 &= 64 \\ 9 \times 9 &= 81 \end{aligned}$$



Деление натуральных чисел



$$\begin{array}{r} 2500 \\ \times 42 \\ \hline 2100 \\ + 8400 \\ \hline 105000 \end{array}$$

- $2 \times 2 = 4$
- $3 \times 3 = 9$
- $4 \times 4 = 16$
- $5 \times 5 = 25$
- $6 \times 6 = 36$
- $7 \times 7 = 49$
- $8 \times 8 = 64$
- $9 \times 9 = 81$



$$\frac{a}{A} = \frac{b}{\sin B} = \frac{c}{\sin C}$$

$$\frac{a}{c} + \frac{b}{c} = \frac{a+b}{c}$$

$$\sin 90^\circ = 1$$



$$\begin{cases} y = \sin 90 \\ x = 25y + 45 \end{cases}$$
$$\begin{cases} y = 1 \\ x = 25 + 45 \\ x = 70 \end{cases}$$

$$(x+y)(x-y) = x^2 - y^2$$



Порядок выполнения действий

$$5 * 3 + 8 = 23$$

$$12 * 3 - 2 * 9 = 18$$

$$56 - (20 + 19) = 17$$

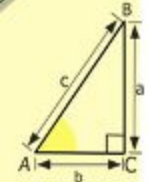
$$35 * 2 : 7 = 10$$

$$18 - 32 : 2 = 2$$

$$12 : 4 + 23 * 4 = 95$$

$$(64 - 39) + (48 + 13) = 86$$

$$8 * (17 - 15) = 16$$



$$\begin{array}{r} \frac{1}{2} 500 \\ \times 42 \\ \hline 210 \\ + 84 \\ \hline 105000 \end{array}$$



$$\frac{a}{\sin A} = \frac{b}{\sin B} = \frac{c}{\sin C}$$

$$\frac{a}{c} + \frac{b}{c} = \frac{a+b}{c}$$

$$\sin 90^\circ = 1$$

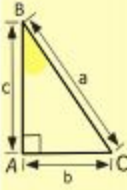
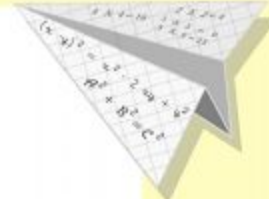


$$\begin{cases} y = \sin 90 \\ x = 25y + 45 \end{cases}$$

$$\begin{cases} y = 1 \\ x = 25 + 45 \end{cases}$$

$$x = 70$$

$$(x+y)(x-y) = x^2 - y^2$$



$$y = \cos$$

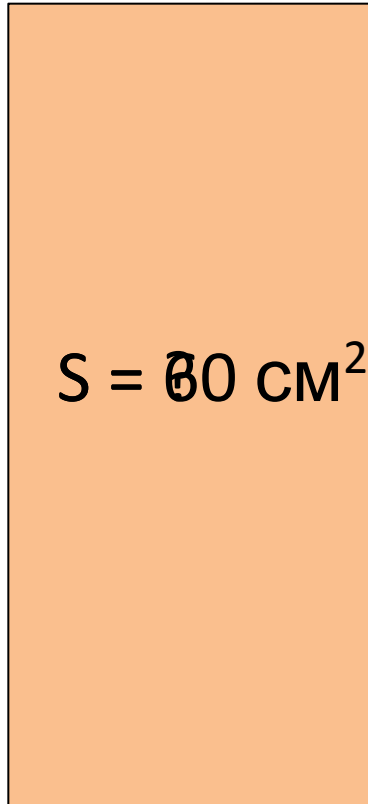
$$\begin{array}{l} 2 \times 2 = 4 \\ 3 \times 3 = 9 \\ 4 \times 4 = 16 \\ 5 \times 5 = 25 \\ 6 \times 6 = 36 \\ 7 \times 7 = 49 \\ 8 \times 8 = 64 \\ 9 \times 9 = 81 \end{array}$$



Площадь прямоугольника

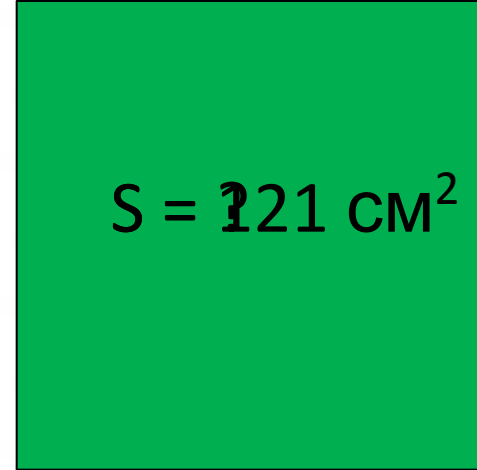
Вычислите площадь:

4 см

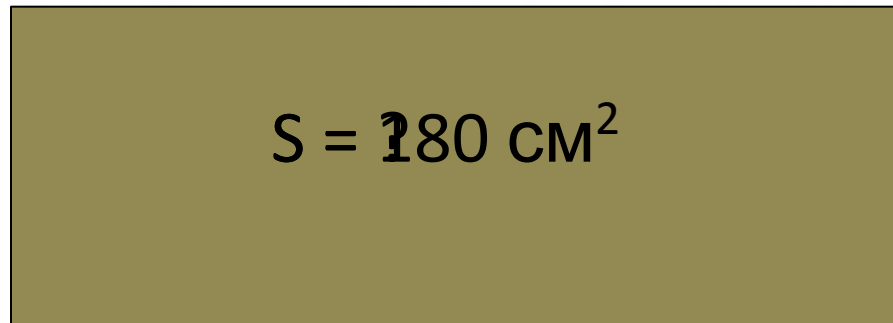


15 см

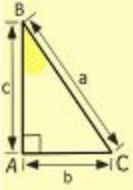
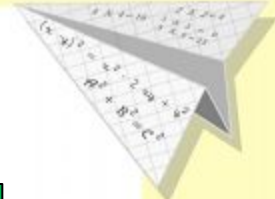
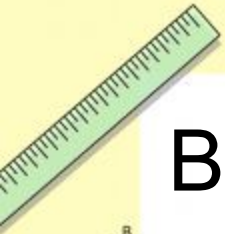
11 см



2 дм



9 см



$$\begin{array}{r} 2500 \\ \times 42 \\ \hline 2100 \\ + 8400 \\ \hline 105000 \end{array}$$

- $2 \times 2 = 4$
- $3 \times 3 = 9$
- $4 \times 4 = 16$
- $5 \times 5 = 25$
- $6 \times 6 = 36$
- $7 \times 7 = 49$
- $8 \times 8 = 64$
- $9 \times 9 = 81$



$$\frac{a}{\sin A} = \frac{b}{\sin B} = \frac{c}{\sin C}$$

$$\frac{a}{c} + \frac{b}{c} = \frac{a+b}{c}$$

$$\sin 90^\circ = 1$$



$$\begin{cases} y = \sin 90 \\ x = 25y + 45 \end{cases}$$

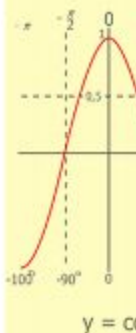
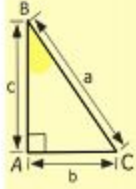
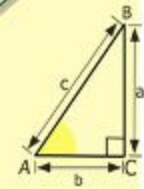

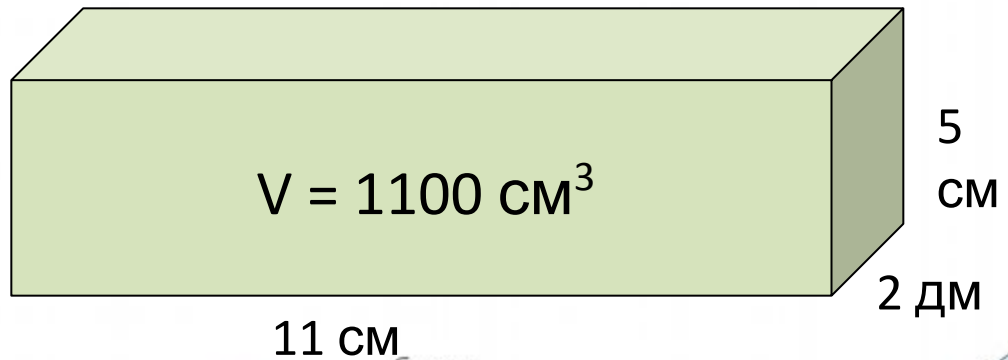
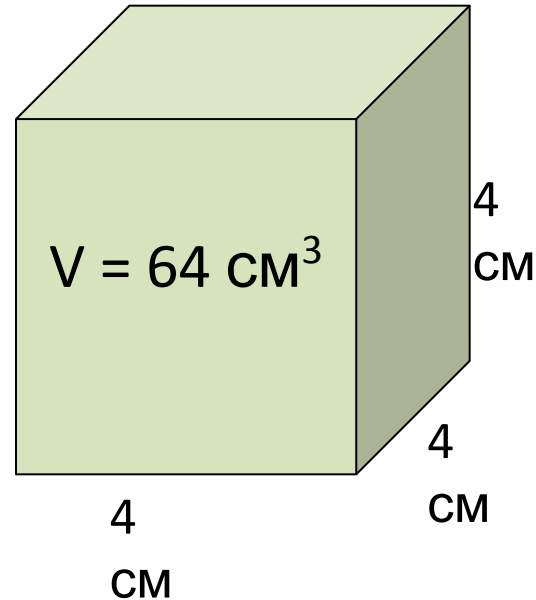
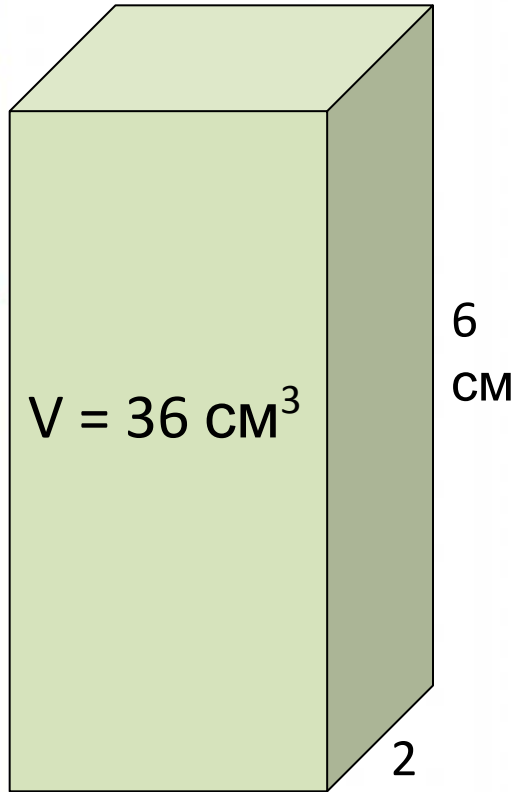
$$\begin{cases} y = 1 \\ x = 25 + 45 \\ \hline x = 70 \end{cases}$$

$$(x+y)(x-y) = x^2 - y^2$$



Объем прямоугольного параллелепипеда

Найдите объем фигур:



$$\begin{array}{r} 2500 \\ \times 42 \\ \hline 2100 \\ + 840 \\ \hline 105000 \end{array}$$

- $2 \times 2 = 4$
- $3 \times 3 = 9$
- $4 \times 4 = 16$
- $5 \times 5 = 25$
- $6 \times 6 = 36$
- $7 \times 7 = 49$
- $8 \times 8 = 64$
- $9 \times 9 = 81$



$\frac{a}{\sin A} = \frac{b}{\sin B} = \frac{c}{\sin C}$

$\frac{a}{c} + \frac{b}{c} = \frac{a+b}{c}$

$\sin 90^\circ = 1$



$$\begin{cases} y = \sin 90 \\ x = 25y + 45 \end{cases}$$

$$\begin{cases} y = 1 \\ x = 25 + 45 \\ x = 70 \end{cases}$$

$(x+y)(x-y) = x^2 - y^2$

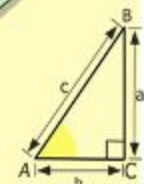
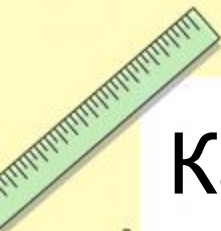



Доли. Обыкновенные дроби

Какая часть фигуры закрашена?

$$\frac{18}{30} \quad \frac{16}{30}$$

$$\frac{5}{30} \quad \frac{6}{30}$$



$$\begin{array}{r} \frac{1}{2} 500 \\ \times 42 \\ \hline 210 \\ + 84 \\ \hline 105000 \end{array}$$



$$\frac{a}{\sin A} = \frac{b}{\sin B} = \frac{c}{\sin C}$$

$$\frac{a}{c} + \frac{b}{c} = \frac{a+b}{c}$$

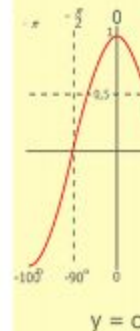
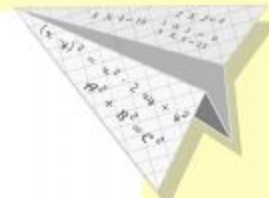
$$\sin 90^\circ = 1$$



$$\begin{cases} y = \sin 90 \\ x = 25y + 45 \end{cases}$$

$$\begin{cases} y = 1 \\ x = 25 + 45 \\ \hline x = 70 \end{cases}$$

$$(x+y)(x-y) = x^2 - y^2$$



- 2 x 2 = 4
- 3 x 3 = 9
- 4 x 4 = 16
- 5 x 5 = 25
- 6 x 6 = 36
- 7 x 7 = 49
- 8 x 8 = 64
- 9 x 9 = 81



Сравнение дробей

Сравните дроби:

$$\frac{15}{12} > \frac{12}{12}$$

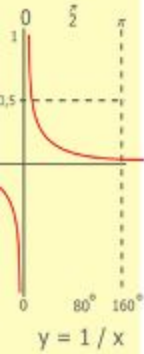
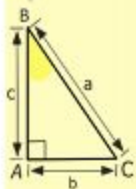
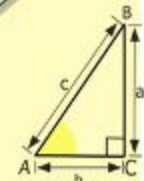
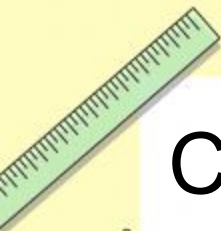
$$\frac{31}{60} > \frac{29}{60}$$

$$\frac{16}{16} = 1$$

$$\frac{5}{8} < \frac{7}{8}$$

$$1 < \frac{4}{3}$$

$$\frac{12}{12} = \frac{21}{21}$$

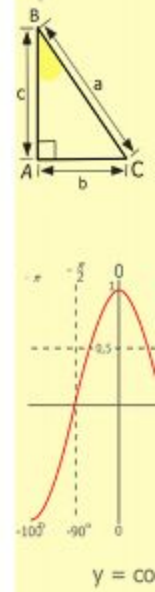
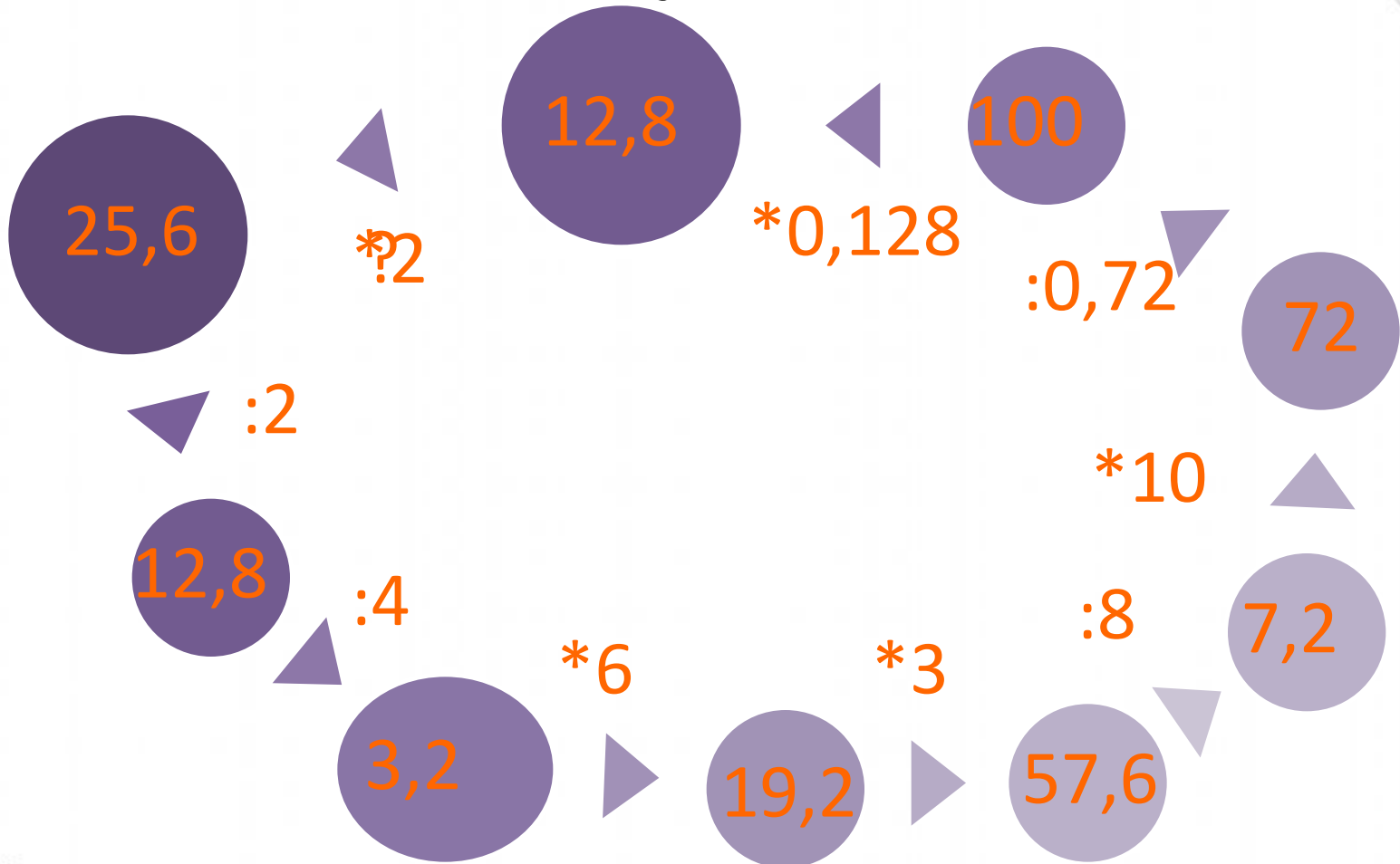


$$\begin{array}{r} 2500 \\ \times 42 \\ \hline 210 \\ + 84 \\ \hline 105000 \end{array}$$

- 2 x 2 = 4
- 3 x 3 = 9
- 4 x 4 = 16
- 5 x 5 = 25
- 6 x 6 = 36
- 7 x 7 = 49
- 8 x 8 = 64
- 9 x 9 = 81



Умножение и деление десятичных дробей на натуральные числа



$$\frac{a}{A} = \frac{b}{\sin B} = \frac{c}{\sin C}$$

$$\frac{a}{c} + \frac{b}{c} = \frac{a+b}{c}$$

$$\sin 90^\circ = 1$$



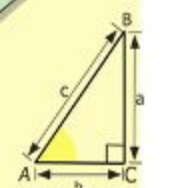
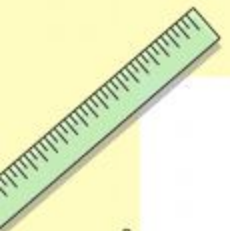
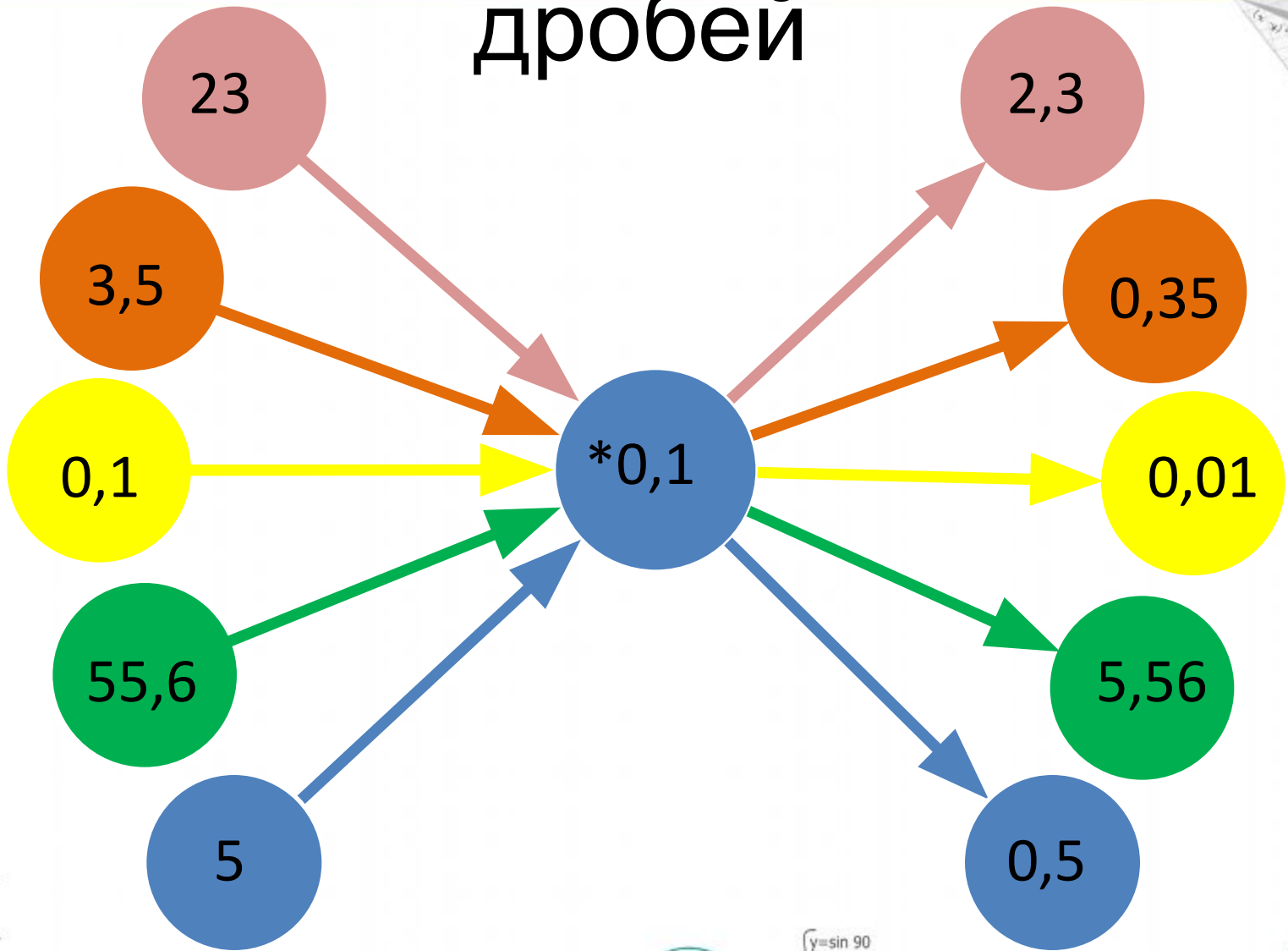
$$\begin{cases} y = \sin 90 \\ x = 25y + 45 \end{cases}$$

$$\begin{cases} y = 1 \\ x = 25 + 45 \\ x = 70 \end{cases}$$

$$(x+y)(x-y) = x^2 - y^2$$



Умножение десятичных дробей



$$\begin{array}{r} 2500 \\ \times 42 \\ \hline 2100 \\ + 8400 \\ \hline 105000 \end{array}$$



$$\frac{a}{A} = \frac{b}{\sin B} = \frac{c}{\sin C}$$

$$\frac{a}{c} + \frac{b}{c} = \frac{a+b}{c}$$

$$\sin 90^\circ = 1$$


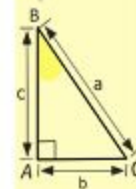



$$\begin{cases} y = \sin 90 \\ x = 25y + 45 \end{cases}$$

$$\begin{cases} y = 1 \\ x = 25 + 45 \end{cases}$$

$$(x+y)(x-y) = x^2 - y^2$$

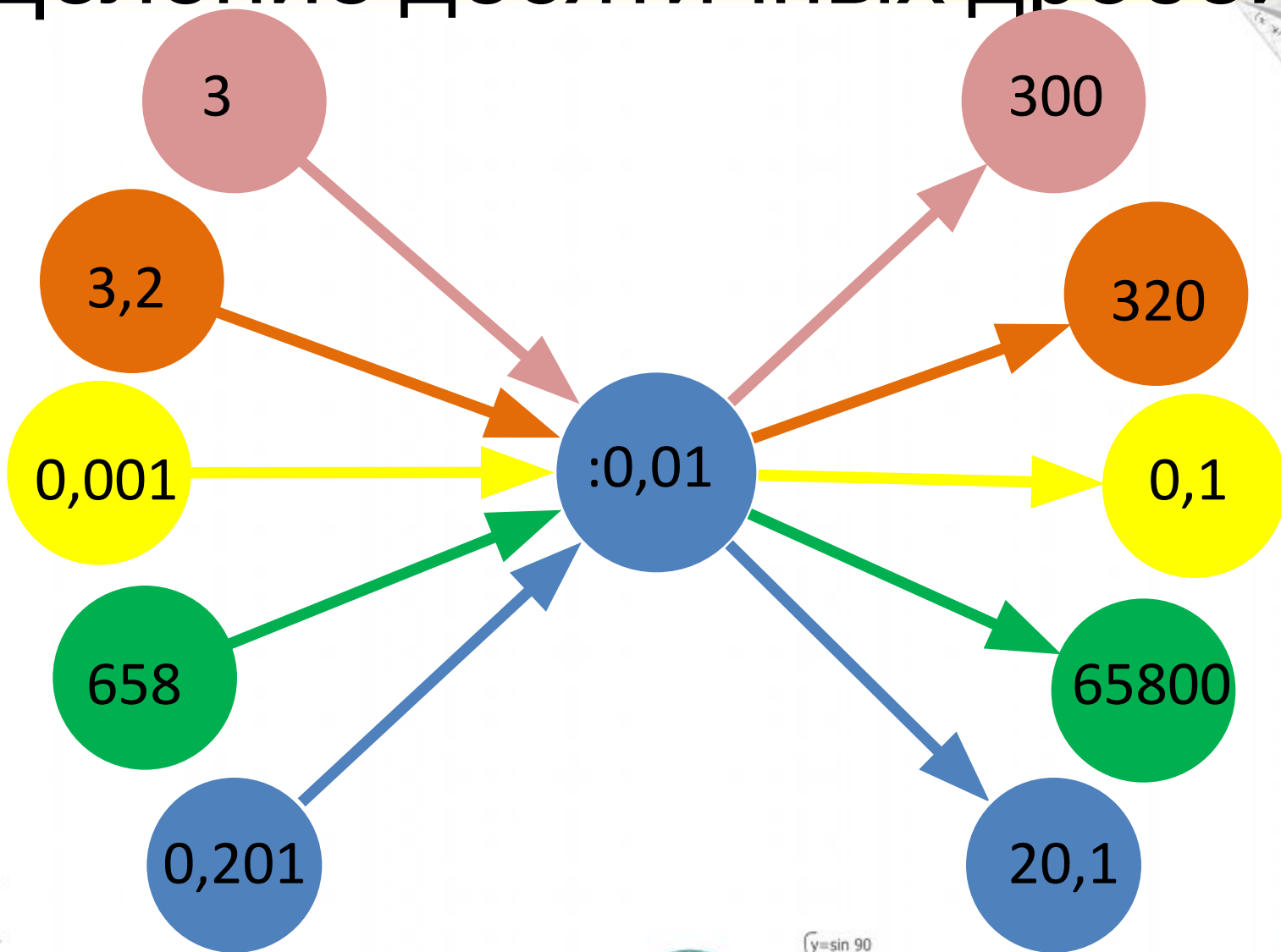
$$x = 70$$



$$\begin{array}{l} 2 \times 2 = 4 \\ 3 \times 3 = 9 \\ 4 \times 4 = 16 \\ 5 \times 5 = 25 \\ 6 \times 6 = 36 \\ 7 \times 7 = 49 \\ 8 \times 8 = 64 \\ 9 \times 9 = 81 \end{array}$$



Деление десятичных дробей



$\frac{1}{2} \frac{500}{x} \frac{42}{210} \frac{84}{105000}$

$\frac{a}{A} = \frac{b}{\sin B} = \frac{c}{\sin C}$

$\frac{a}{c} + \frac{b}{c} = \frac{a+b}{c}$

$y = \frac{1}{x}$

$y = \sin 90^\circ = 1$

$(x+y)(x-y) = x^2 - y^2$

$2 \times 2 = 4$
 $3 \times 3 = 9$
 $4 \times 4 = 16$
 $5 \times 5 = 25$
 $6 \times 6 = 36$
 $7 \times 7 = 49$
 $8 \times 8 = 64$
 $9 \times 9 = 81$

$y = \sin 90^\circ = 1$
 $x = 25y + 45$
 $y = 1$
 $x = 25 + 45$
 $x = 70$



Проценты

Найдите неизвестное

A 40 см B

100%

A 24 B

60%

A 10 B

?%

A ?32 B

80%

A 28 B

?%

$$\frac{a}{A} = \frac{b}{\sin B} = \frac{c}{\sin C}$$

$$\frac{a}{c} + \frac{b}{c} = \frac{a+b}{c}$$

$$\sin 90^\circ = 1$$

$$\begin{cases} y = \sin 90 \\ x = 25y + 45 \end{cases}$$

$$\begin{cases} y = 1 \\ x = 25 + 45 \\ \hline x = 70 \end{cases}$$

$$(x+y)(x-y) = x^2 - y^2$$

- 2 x 2 = 4
- 3 x 3 = 9
- 4 x 4 = 16
- 5 x 5 = 25
- 6 x 6 = 36
- 7 x 7 = 49
- 8 x 8 = 64
- 9 x 9 = 81

