

Устный счёт по математике

Учащиеся 5 класса

ГБОУ СОШ № 478

Учитель: Мичурина Е.В.

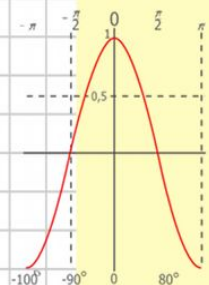
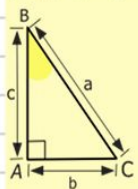
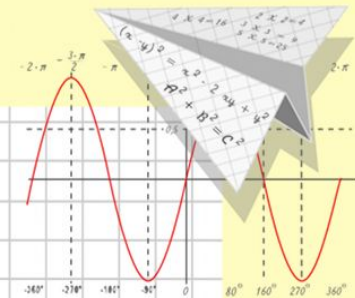
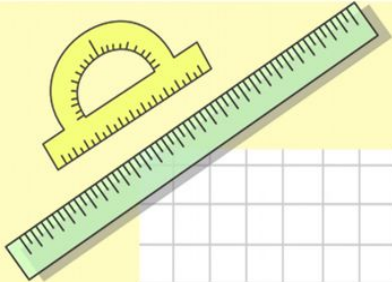
Математик

а

Устный счёт

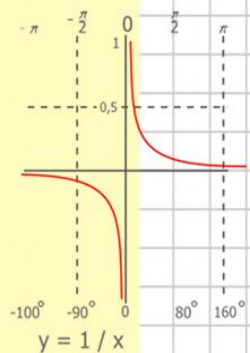
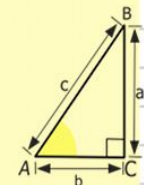
5 класс

Андреева Ксения



$y = \cos x$

- $2 \times 2 = 4$
- $3 \times 3 = 9$
- $4 \times 4 = 16$
- $5 \times 5 = 25$
- $6 \times 6 = 36$
- $7 \times 7 = 49$
- $8 \times 8 = 64$




$$\begin{array}{r} 2500 \\ \times 42 \\ \hline 2100 \\ + 8400 \\ \hline 105000 \end{array}$$



$$\frac{a}{\sin A} = \frac{b}{\sin B} = \frac{c}{\sin C}$$

$$\frac{a}{c} + \frac{b}{c} = \frac{a+b}{c}$$

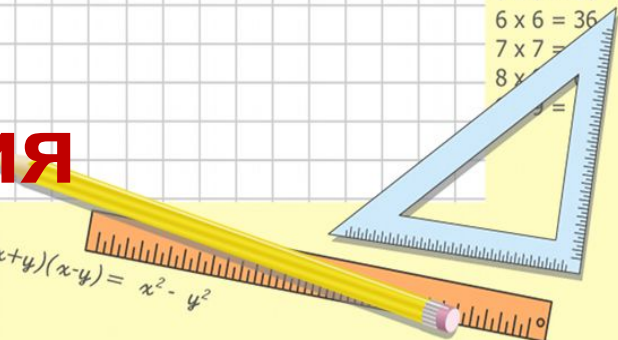


$$\sin 90^\circ = 1$$

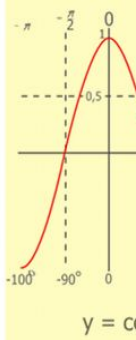
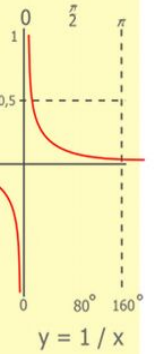
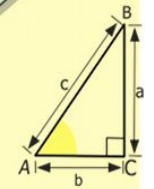
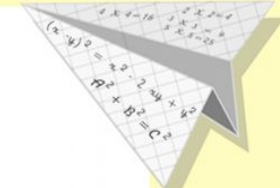



$$\begin{cases} x = 25y + 45 \\ y = 1 \\ x = 25 + 45 \\ x = 70 \end{cases}$$

$$(x+y)(x-y) = x^2 - y^2$$



§1. Вычислите



$$\begin{array}{r}
 19+69 \\
 :8 \\
 \times 7 \\
 -5 \\
 :9 \\
 \hline
 ?
 \end{array}$$

$$\begin{array}{r}
 72-34 \\
 :2 \\
 \times 5 \\
 -5 \\
 :9 \\
 \hline
 ?
 \end{array}$$

$$\begin{array}{r}
 68:17 \\
 \times 21 \\
 +26 \\
 -90 \\
 :2 \\
 \hline
 ?
 \end{array}$$

$$\begin{array}{r}
 \frac{1}{2} 500 \\
 \times 42 \\
 \hline
 210 \\
 + 84 \\
 \hline
 105000
 \end{array}$$

- $2 \times 2 = 4$
- $3 \times 3 = 9$
- $4 \times 4 = 16$
- $5 \times 5 = 25$
- $6 \times 6 = 36$
- $7 \times 7 = 49$
- $8 \times 8 = 64$
- $9 \times 9 = 81$



$$\frac{a}{\sin A} = \frac{b}{\sin B} = \frac{c}{\sin C}$$

$$\frac{a}{c} + \frac{b}{c} = \frac{a+b}{c}$$

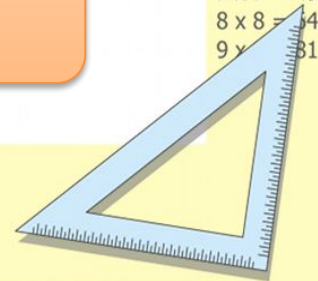
$$\sin 90^\circ = 1$$



$$\begin{cases}
 y = \sin 90 \\
 x = 25y + 45
 \end{cases}$$

$$\begin{cases}
 y = 1 \\
 x = 25 + 45 \\
 \hline
 x = 70
 \end{cases}$$

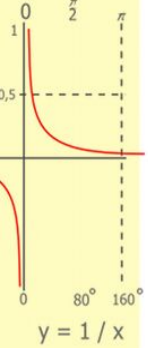
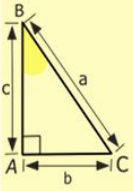
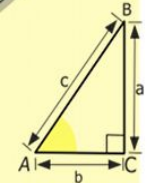
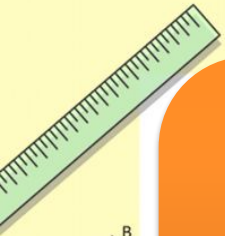
$$(x+y)(x-y) = x^2 - y^2$$



§ 2. Решите

$$40 \cdot (29 - 24 : 3) =$$

$$420 : (20 : 4 + 16) \cdot 5 =$$



$$\begin{array}{r} 2500 \\ \times 42 \\ \hline 2100 \\ + 840 \\ \hline 105000 \end{array}$$

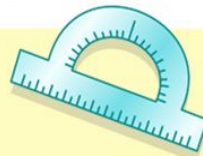
- $2 \times 2 = 4$
- $3 \times 3 = 9$
- $4 \times 4 = 16$
- $5 \times 5 = 25$
- $6 \times 6 = 36$
- $7 \times 7 = 49$
- $8 \times 8 = 64$
- $9 \times 9 = 81$



$$\frac{a}{\sin A} = \frac{b}{\sin B} = \frac{c}{\sin C}$$

$$\frac{a}{c} + \frac{b}{c} = \frac{a+b}{c}$$

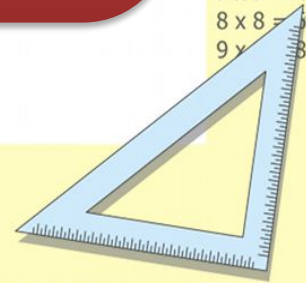
$$\sin 90^\circ = 1$$



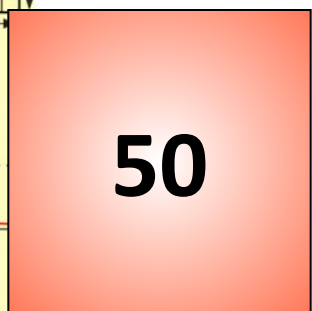
$$\begin{cases} y = \sin 90 \\ x = 25y + 45 \end{cases}$$

$$\begin{cases} y = 1 \\ x = 25 + 45 \\ \hline x = 70 \end{cases}$$

$$(x+y)(x-y) = x^2 - y^2$$

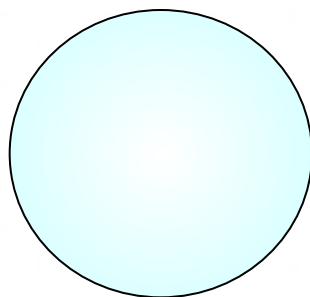


§ 3. Какое число получится в конце цепочки?





50


+ 40




: 3



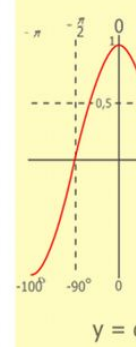
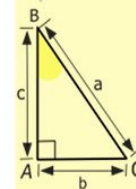
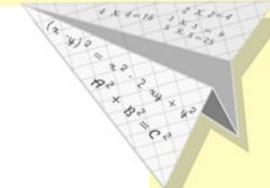

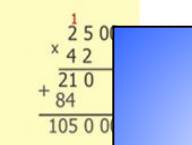
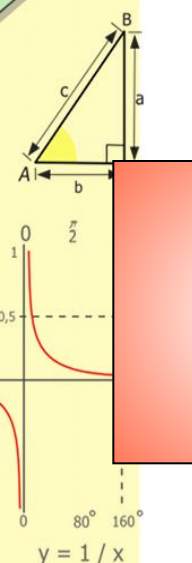
: 5



x 8

?



- 2 x 2 = 4
- 3 x 3 = 9
- 4 x 4 = 16
- 5 x 5 = 25
- 6 x 6 = 36
- 7 x 7 = 49
- 8 x 8 = 64
- 9 x 9 = 81

$$\frac{a}{A} = \frac{b}{B} = \frac{c}{C}$$

$$\frac{a}{c} + \frac{b}{c} = \frac{a+b}{c}$$

$$\sin 90^\circ = 1$$

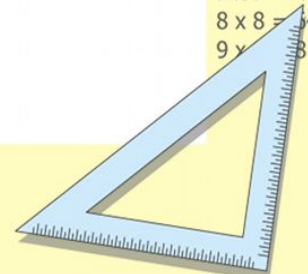


$$\begin{cases} y = \sin 90 \\ x = 25y + 45 \end{cases}$$

$$\begin{cases} y = 1 \\ x = 25 + 45 \end{cases}$$

$$(x+y)(x-y) = x^2 - y^2$$

$$x = 70$$



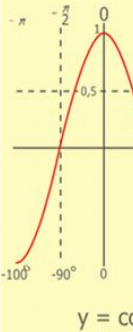
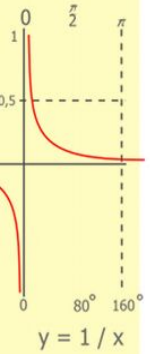
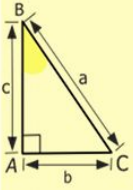
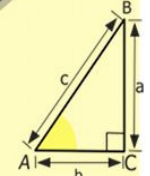
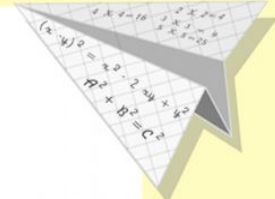
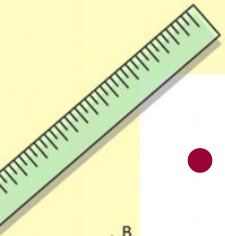
§ 4. Решите уравнения

- $X + 605 = 700$
- $603 - p = 83$
- $125 : c = 5$


$$y \times 22 = 110$$

$$a - 169 = 21$$

$$v : 7 = 9$$



$$\begin{array}{r} 1\ 5\ 00 \\ \times 42 \\ \hline 210 \\ + 84 \\ \hline 105\ 00 \end{array}$$

$$\begin{array}{l} 2 \times 2 = 4 \\ 3 \times 3 = 9 \\ 4 \times 4 = 16 \\ 5 \times 5 = 25 \\ 6 \times 6 = 36 \\ 7 \times 7 = 49 \\ 8 \times 8 = 64 \\ 9 \times 9 = 81 \end{array}$$


$$\frac{a}{\sin A} = \frac{b}{\sin B} = \frac{c}{\sin C}$$

$$\frac{a}{c} + \frac{b}{c} = \frac{a+b}{c}$$

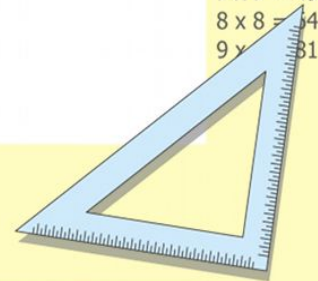
$$\sin 90^\circ = 1$$



$$\begin{cases} y = \sin 90 \\ x = 25y + 45 \end{cases}$$

$$\begin{cases} y = 1 \\ x = 25 + 45 \\ \hline x = 70 \end{cases}$$

$$(x+y)(x-y) = x^2 - y^2$$



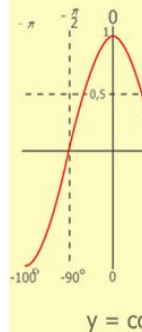
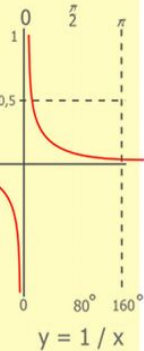
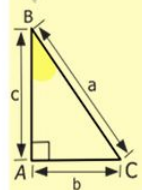
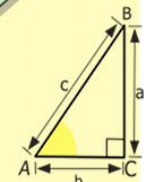
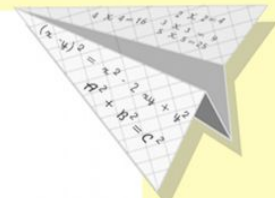

§ 5. Сравните

3ц 45кг и 3т 25кг

7м 25дм и 800дм 4см

9т 5ц и 950ц

- 1 км и 890 м
- 530 см и 5 м
- 1000 м и 1км
- 740 см и 7 м



$$\begin{array}{r} 1 \\ 2500 \\ \times 42 \\ \hline 210 \\ + 84 \\ \hline 105000 \end{array}$$

- 2 x 2 = 4
- 3 x 3 = 9
- 4 x 4 = 16
- 5 x 5 = 25
- 6 x 6 = 36
- 7 x 7 = 49
- 8 x 8 = 64
- 9 x 9 = 81



$$\frac{a}{\sin A} = \frac{b}{\sin B} = \frac{c}{\sin C}$$

$$\frac{a}{c} + \frac{b}{c} = \frac{a+b}{c}$$

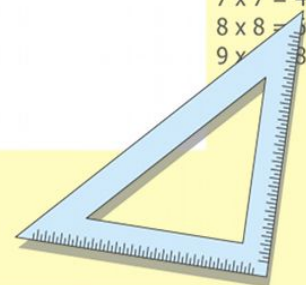
$$\sin 90^\circ = 1$$



$$\begin{cases} y = \sin 90 \\ x = 25 + 45 \end{cases}$$

$$\begin{cases} y = 1 \\ x = 25 + 45 \\ \hline x = 70 \end{cases}$$

$$(x+y)(x-y) = x^2 - y^2$$



§ 6. Выполните действия

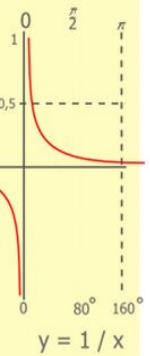
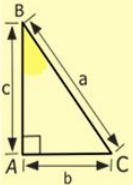
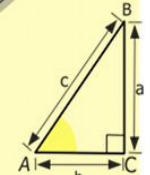
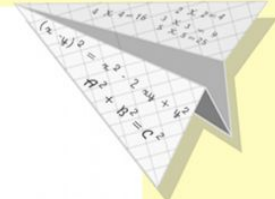
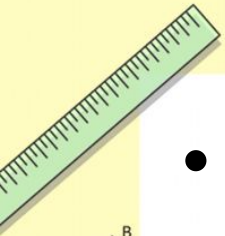
- 1 дм 6 см + 7 см

- 5 дм – 4 см

- 1 км – 50 м


- 3 см 4 мм · 4

- 3 км 200 м · 3



$$\begin{array}{r} 1 \\ \times 2500 \\ \hline 2500 \\ + 42 \\ \hline 210 \\ + 84 \\ \hline 105000 \end{array}$$

- 2 x 2 = 4
- 3 x 3 = 9
- 4 x 4 = 16
- 5 x 5 = 25
- 6 x 6 = 36
- 7 x 7 = 49
- 8 x 8 = 64
- 9 x 9 = 81



$$\frac{a}{A} = \frac{b}{\sin B} = \frac{c}{\sin C}$$

$$\frac{a}{c} + \frac{b}{c} = \frac{a+b}{c}$$

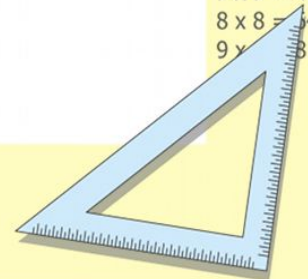
$$\sin 90^\circ = 1$$



$$\begin{cases} y = \sin 90 \\ x = 25y + 45 \end{cases}$$

$$\begin{cases} y = 1 \\ x = 25 + 45 \\ \hline x = 70 \end{cases}$$

$$(x+y)(x-y) = x^2 - y^2$$



§ 7. Какое направление движения соответствует решению?

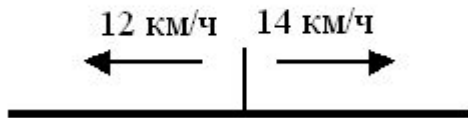
$$14 \text{ км/ч} + 12 \text{ км/ч} = 26 \text{ км/ч}$$

Схема 1




Навстречу...

Схема 2



В
противоположных...

Схема 3



В одном
...

$$\frac{a}{A} = \frac{b}{\sin B} = \frac{c}{\sin C}$$

$$\frac{a}{c} + \frac{b}{c} = \frac{a+b}{c}$$

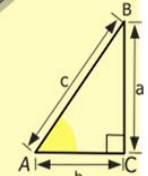

$$\sin 90^\circ = 1$$

$$\begin{cases} y = \sin 90 \\ x = 25y + 45 \end{cases}$$

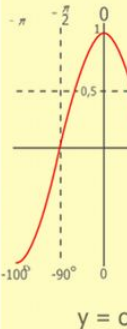
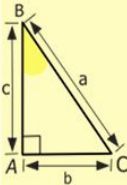
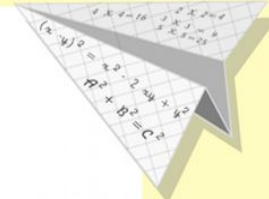

$$\begin{cases} y = 1 \\ x = 25 + 45 \end{cases}$$

$$x = 70$$

$$(x+y)(x-y) = x^2 - y^2$$

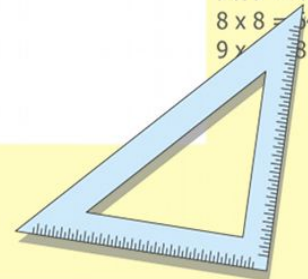


$$\begin{array}{r} 1\ 2\ 5\ 00 \\ \times 42 \\ \hline 21\ 0 \\ + 84 \\ \hline 105\ 000 \end{array}$$



$$y = \cos$$

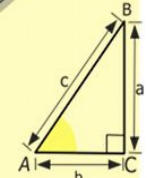
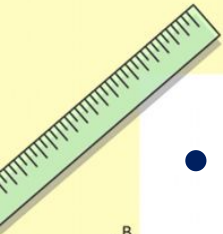
$$\begin{array}{l} 2 \times 2 = 4 \\ 3 \times 3 = 9 \\ 4 \times 4 = 16 \\ 5 \times 5 = 25 \\ 6 \times 6 = 36 \\ 7 \times 7 = 49 \\ 8 \times 8 = 64 \\ 9 \times 9 = 81 \end{array}$$




§ 8. Реши задачу

- Скорость пешехода **5 км/ч**, а
- скорость велосипедиста **20 км/ч**. Во
- сколько раз скорость
- велосипедиста больше скорости
- пешехода?

- **а) в 2 раза;** **б) в 3 раза;**
- **в) в 4 раза;** **г) на 15 км/ч**



$$\begin{array}{r} \frac{1}{2} 500 \\ \times 42 \\ \hline 210 \\ + 84 \\ \hline 105000 \end{array}$$



$$\frac{a}{A} = \frac{b}{\sin B} = \frac{c}{\sin C}$$

$$\frac{a}{c} + \frac{b}{c} = \frac{a+b}{c}$$

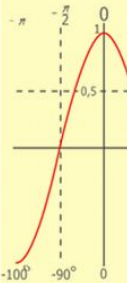
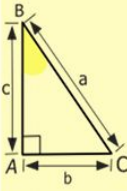
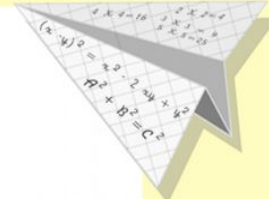
$$\sin 90^\circ = 1$$



$$\begin{cases} y = \sin 90 \\ x = 25y + 45 \end{cases}$$

$$\begin{cases} y = 1 \\ x = 25 + 45 \\ \hline x = 70 \end{cases}$$

$$(x+y)(x-y) = x^2 - y^2$$



$$y = \cos$$

$$\begin{array}{l} 2 \times 2 = 4 \\ 3 \times 3 = 9 \\ 4 \times 4 = 16 \\ 5 \times 5 = 25 \\ 6 \times 6 = 36 \\ 7 \times 7 = 49 \\ 8 \times 8 = 64 \\ 9 \times 9 = 81 \end{array}$$



Вычисли устно и выбери ответ:

100-70

*3

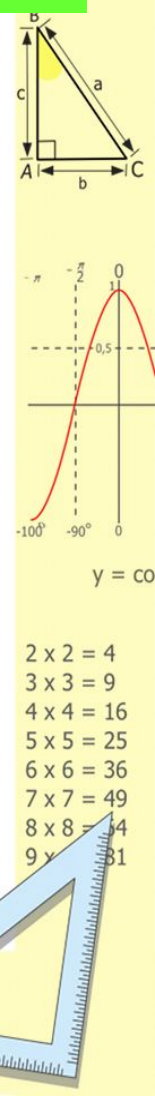
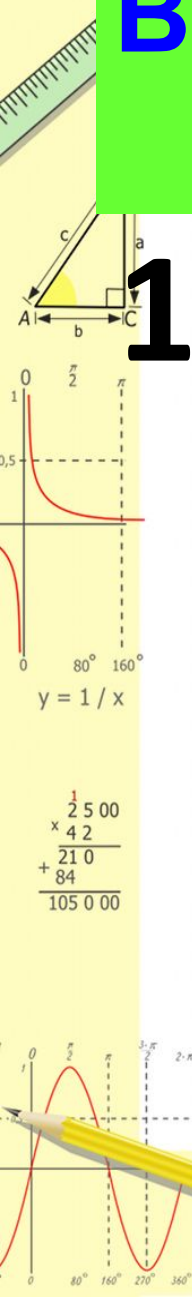
-18

:36

4

3

2



$$\frac{a}{\sin A} = \frac{b}{\sin B} = \frac{c}{\sin C}$$

$$\frac{a}{c} + \frac{b}{c} = \frac{a+b}{c}$$

$$\sin 90^\circ = 1$$

$$\begin{cases} y = \\ x = 2 \\ y = 1 \\ x = 25 + 45 \\ x = 70 \end{cases}$$

- 2 x 2 = 4
- 3 x 3 = 9
- 4 x 4 = 16
- 5 x 5 = 25
- 6 x 6 = 36
- 7 x 7 = 49
- 8 x 8 = 64
- 9 x 9 = 81

Вычисли устно и выбери ответ:

1 ц + 50 кг

:30

-700 г


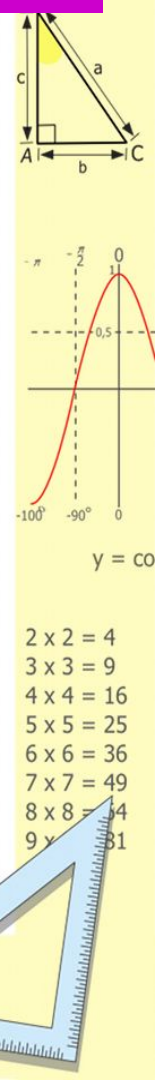
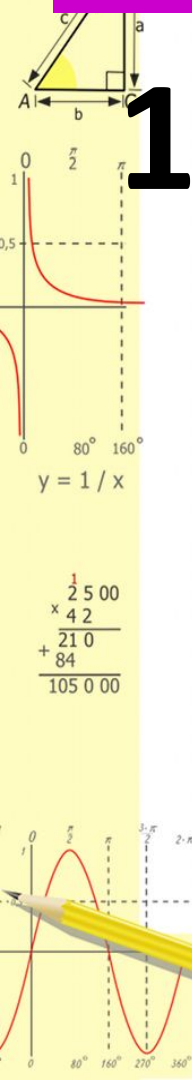
43

43

00

40

03



$$\begin{cases} y = \sin 90 \\ x = 25y + 45 \end{cases}$$
$$\begin{cases} y = 1 \\ x = 25 + 45 \end{cases}$$
$$\frac{x}{70}$$
$$(x+y)(x-y) = x^2 - y^2$$

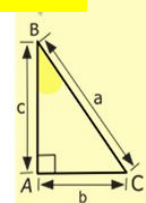



Вычисли устно и выбери ответ:

$$100 - 80$$

$$: 4$$

$$* 14$$

$$- 67$$



- $2 \times 2 = 4$
- $3 \times 3 = 9$
- $4 \times 4 = 16$
- $5 \times 5 = 25$
- $6 \times 6 = 36$
- $7 \times 7 = 49$
- $8 \times 8 = 64$
- $9 \times 9 = 81$

$$\frac{a}{A} = \frac{b}{\sin B} = \frac{c}{\sin C}$$
$$\frac{a}{c} + \frac{b}{c} = \frac{a+b}{c}$$

$$\sin 90^\circ = 1$$

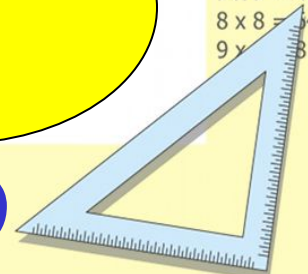


$$\begin{cases} y = \sin 90 \\ x = 25y + 45 \end{cases}$$

$$\begin{cases} y = 1 \\ x = 25 + 45 \end{cases}$$

$$(x+y)(x-y) = x^2 - y^2$$

$$\frac{x}{70}$$



Вычисли устно и выбери ответ:

$$50 + 40$$

$$: 30$$

$$* 50$$

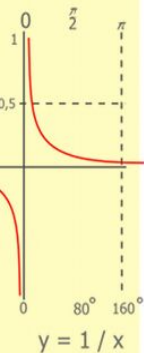
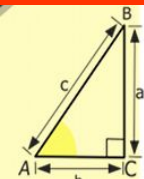
$$- 100$$

4

9

6

0



$$\begin{array}{r} \frac{1}{2} 500 \\ \times 42 \\ \hline 210 \\ + 84 \\ \hline 105000 \end{array}$$



$$\frac{a}{\sin A} = \frac{b}{\sin B} = \frac{c}{\sin C}$$

$$\frac{a}{c} + \frac{b}{c} = \frac{a+b}{c}$$

$$\sin 90^\circ = 1$$

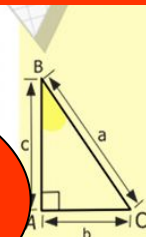


$$\begin{cases} y = \sin 90 \\ x = 25y + 45 \end{cases}$$

$$\begin{cases} y = 1 \\ x = 25 + 45 \end{cases}$$

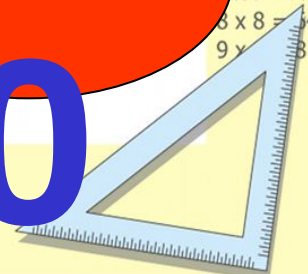
$$x = 70$$

$$(x+y)(x-y) = x^2 - y^2$$



$$y = \cos$$

$$\begin{array}{l} 2 \times 2 = 4 \\ 3 \times 3 = 9 \\ 4 \times 4 = 16 \\ 5 \times 5 = 25 \\ 6 \times 6 = 36 \\ 7 \times 7 = 49 \\ 8 \times 8 = 64 \\ 9 \times 9 = 81 \end{array}$$



Вычисли устно и выбери ответ:

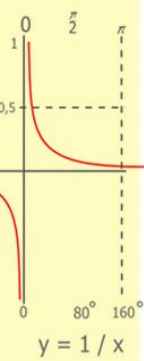
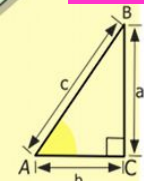
1ч 20мин : 4

-15мин

:100 с

+ 7 с

1
10
1
0



$$\begin{array}{r} 2500 \\ \times 42 \\ \hline 210 \\ + 84 \\ \hline 105000 \end{array}$$



$$\frac{a}{\sin A} = \frac{b}{\sin B} = \frac{c}{\sin C}$$

$$\frac{a}{c} + \frac{b}{c} = \frac{a+b}{c}$$

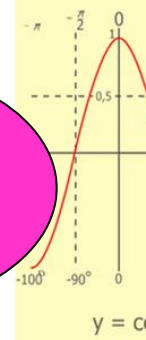
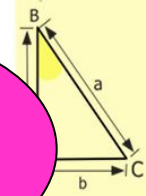
$$\sin 90^\circ = 1$$



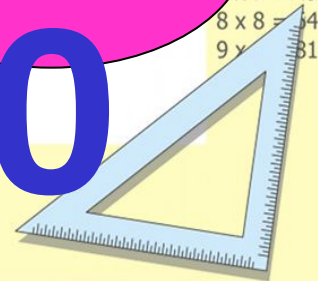
$$\begin{cases} y = \sin 90 \\ x = 25y + 45 \end{cases}$$

$$\begin{cases} y = 1 \\ x = 25 + 45 \\ \hline x = 70 \end{cases}$$

$$(x+y)(x-y) = x^2 - y^2$$



- 2 x 2 = 4
- 3 x 3 = 9
- 4 x 4 = 16
- 5 x 5 = 25
- 6 x 6 = 36
- 7 x 7 = 49
- 8 x 8 = 64
- 9 x 9 = 81



Вычисли устно и выбери ответ:

$$30 + 70$$

$$: 10$$

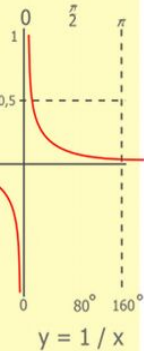
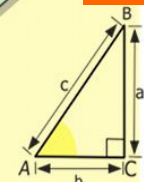
$$* 15$$

$$- 150$$


2

1

0



$$\begin{array}{r} 2500 \\ \times 42 \\ \hline 2100 \\ + 840 \\ \hline 105000 \end{array}$$



$$\frac{a}{\sin A} = \frac{b}{\sin B} = \frac{c}{\sin C}$$

$$\frac{a}{c} + \frac{b}{c} = \frac{a+b}{c}$$

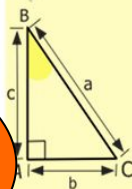
$$\sin 90^\circ = 1$$



$$\begin{cases} y = \sin 90 \\ x = 25y + 45 \end{cases}$$

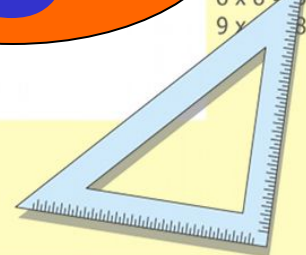
$$\begin{cases} y = 1 \\ x = 25 + 45 \\ \hline x = 70 \end{cases}$$

$$(x+y)(x-y) = x^2 - y^2$$



$$y = \cos$$

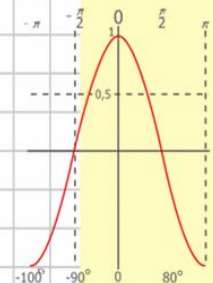
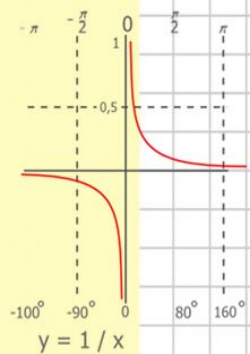
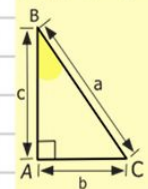
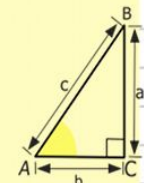
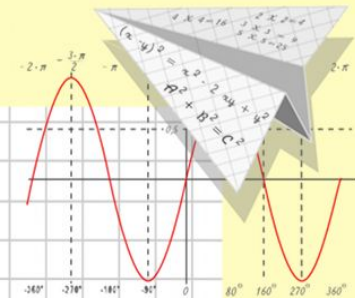
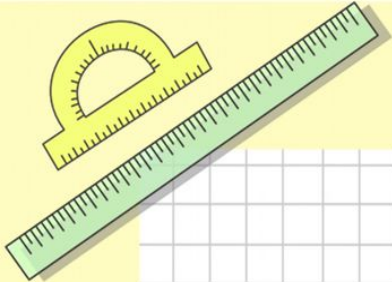
$$\begin{array}{l} 2 \times 2 = 4 \\ 3 \times 3 = 9 \\ 4 \times 4 = 16 \\ 5 \times 5 = 25 \\ 6 \times 6 = 36 \\ 7 \times 7 = 49 \\ 8 \times 8 = 64 \\ 9 \times 9 = 81 \end{array}$$



Математик

а

Конец



$$\begin{array}{r} 1 \\ 2500 \\ \times 42 \\ \hline 210 \\ + 84 \\ \hline 10500 \end{array}$$

y = cos x

- 2 x 2 = 4
- 3 x 3 = 9
- 4 x 4 = 16
- 5 x 5 = 25
- 6 x 6 = 36
- 7 x 7 = 49
- 8 x 8 = 64



$$\frac{a}{\sin A} = \frac{b}{\sin B} = \frac{c}{\sin C}$$

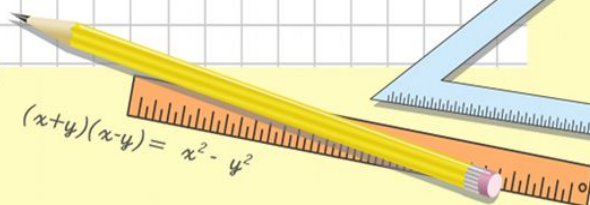
$$\frac{a}{c} + \frac{b}{c} = \frac{a+b}{c}$$



$$\sin 90^\circ = 1$$



$$\begin{cases} y = \sin 90 \\ x = 25y + 45 \end{cases}$$
$$\begin{cases} y = 1 \\ x = 25 + 45 \\ \hline x = 70 \end{cases}$$



$$(x+y)(x-y) = x^2 - y^2$$

УСТНЫЙ СЧЕТ ПО МАТЕМАТИКЕ



Антонов Александр

5 «Б»

Нахождение значений математических выражений

900×8

8×7000

$1428 : 14$

601×9

$3800 + 2200$

$4200 : 6$

$6999 + 1$

$3800 - 2200$

$7200 - 4800$

ВЫЧИСЛИТЕ УСТНО:

ВЫЧИСЛИТЕ УСТНО:

$$35+75$$

$$55+87$$

$$75+84$$

$$95+81$$

$$77+24$$

$$46+95$$

$$23+82$$



Умножение чисел

$36 * 3 =$

$14 * 22 =$

$54 * 5 =$

$34 * 30 =$

$26 * 10 =$

$18 * 20 =$

$58 * 2 =$

$19 * 10 =$

$97 * 100 =$

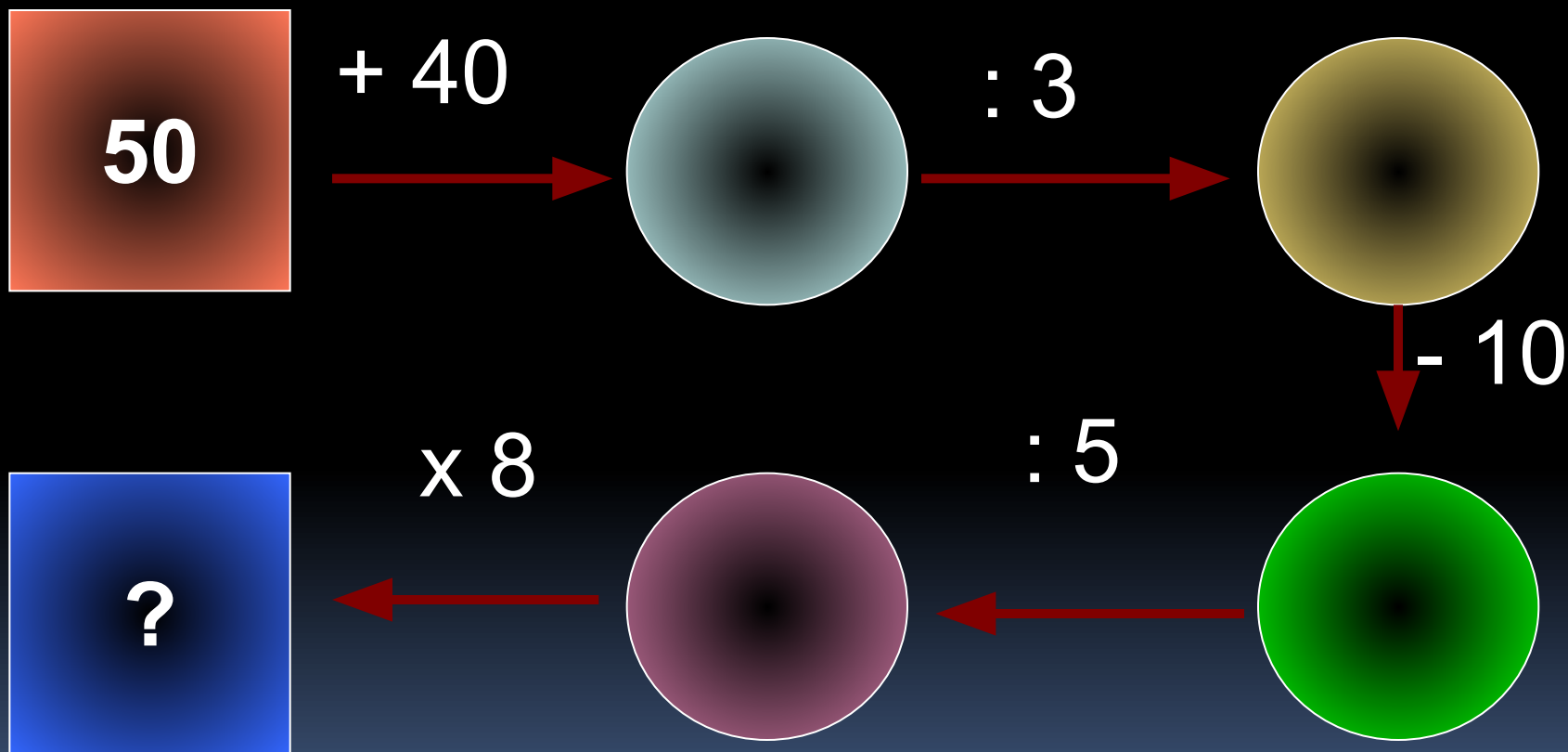
$13 * 50 =$

$26 * 20 =$

$100 * 99 =$



какое число получится в конце цепочки?



Найдите неизвестные компоненты

$$x + 605 = 700$$

$$v : 7 = 9$$

$$y \times 22 = 110$$

$$603 - p = 83$$

$$a - 169 = 21$$

$$125 : c = 5$$

3. Скорость пешехода 5 км/ч , а скорость велосипедиста 20 км/ч . Во сколько раз скорость велосипедиста больше скорости пешехода?


а) в 2 раза;


б) в 3 раза;

в) в 4 раза;

г) на 15 км/ч .

Надеюсь Вам понравилось...





Математика

Устный счёт

а) 15×8

16×8

14×3

13×8

16×2

18×3

б) $(111 \times 3) - 200$

$(16 \times 5) - 60$

$(13 \times 6) - 78$

$(61 \times 1) : 0$

$(55 - 5) : 0$

$(88 - 8) : 2$

в) 11×6

12×3

16×4

13×1

14×5

15×3

Устный счёт

а) $360:4$

$180:9$

$810:9$

$630:9$

$270:3$

$450:9$

б) 90×2

90×8

90×3

90×7

60×9

50×9

в) 146×2

173×3

416×2

118×5

281×2

418×2

Посмотрите. Всё ль в порядке:
Книжки, ручки и тетрадки.
Прозвенел сейчас звонок.
Начинается урок .



Цурцумия
Моника

Решите примеры

ПИСЬМЕННО

~~А) $(2896 \times 23) + 678$~~

Б) $567 \times 7 + 7890 - 3$


В) $(5689 - 432) + 7890$

Г) $7080 \times 9 + 567$

Д) $678 + 789 \times 9$

Е) $(1000 + 2000) - 678$

Ж) $456 \times 78 + 789$



Примеры

Вариант 1

А) $7831+3190$

Б) $5063-387$

В) 2056×690

Г) $23184:46$

Вариант 2

А) $8537+2084$

Б) $3081-792$

В) 540×2609

Г) $18942:21$



Уравнение

А) $48x = 96$

Б) $a - 29 = 67$

В) $47 + a = 83$

Г) $a : 28 = 4$



Найди значение
выражения:

А) $43 \times 21 + 57 \times 21$

Б) $211 \times 13 - 11 \times 13$

В) $36 \times 29 + 36 \times 71$


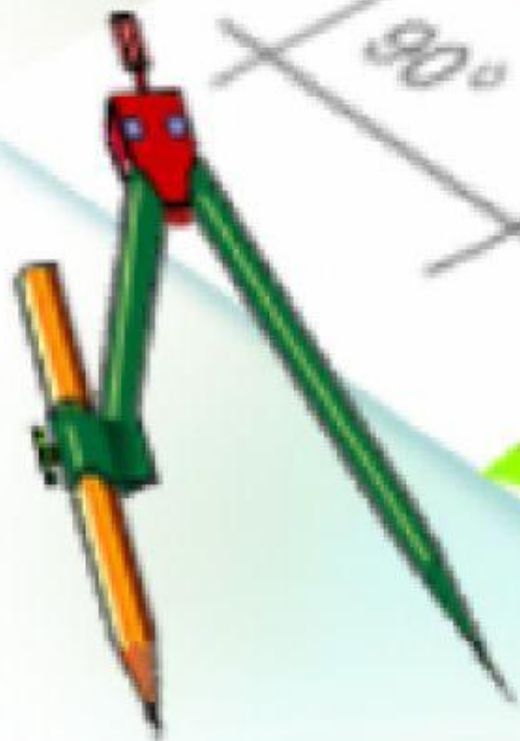
Г) $329 \times 18 - 129 \times 18$



$$4 \times 5 = 20$$



$$4 \frac{1}{100} \text{ m}$$



Пробежимся по стране Математики!




Лукьянов Никита

Сначала порешаем!

- 1) $438 + 258 =$ 1) $3289 - 1289 =$
1) $64 : 8 \times 20 - 3 =$
- 2) $365 + 635 =$ 2) $548 - 208 =$ 2) $72 : 8 \times 8 - 8 =$
- 3) $523 + 167 =$ 3) $1000 - 246 =$ 3) $8 \times 6 : 4 + 88 =$
- 4) $196 + 204 =$ 4) $726 - 206 =$ 4) $125 : 5 \times 4 =$
- 5) $743 + 127 =$ 5) $7245 - 3045 =$
5) $120 : 10 \times 5 + 43 =$



Затем порешаем задачи.

- Скорость теплохода 5 км/ч . За сколько часов пройдет 35 км теплоход?
- 

На сколько число 3456 > числа
466?



Двигаемся дальше!



Сравните



- 12М....12ДМ
- 23КМ....23000М
- 12Ц...3Т
- 34КГ...340000Г
- 50М...5000СМ



Решим задачу!



$v + 67$ если, $v \dots$


- а) $v=3$
- б) $v=13$
- в) $v=103$

Найди периметр
треугольника!

32см

35см

34см



Реши задачу!



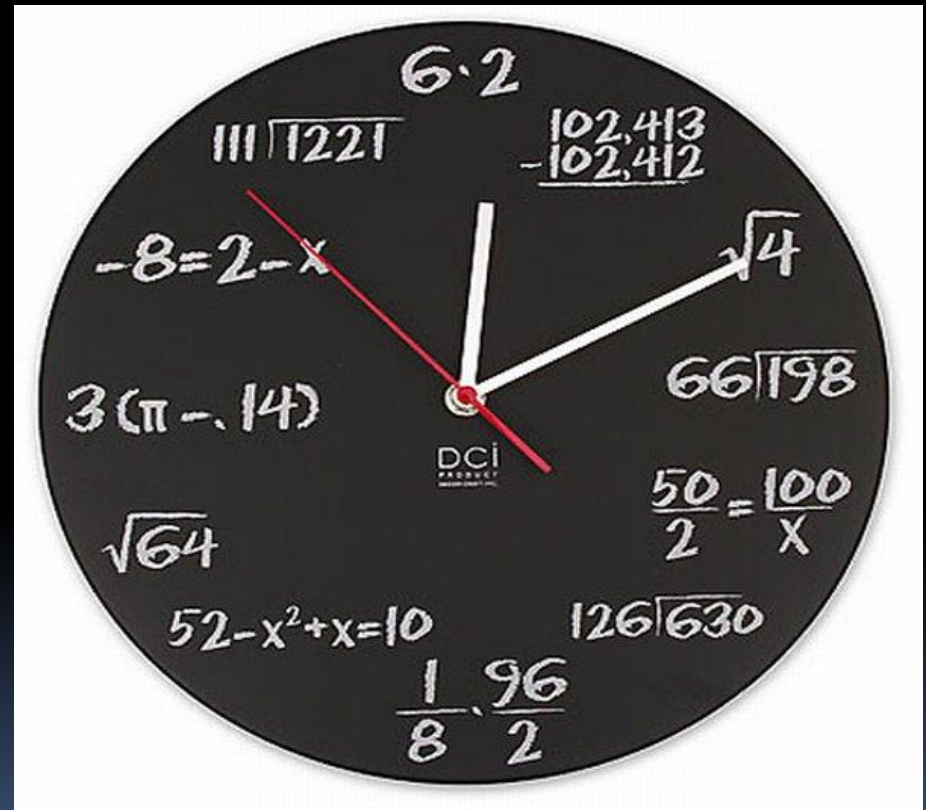
- Гусыня пролетела 300км . Она летела со скоростью 5км/ч. Сколько часов летела гусыня?

Сравните числа!


- 2834...2843
- 10248....10258
- 3000....30000

Что это за формула?

- $(A+B) \times 2$
- $A \times A$
- $A \times 4$



Реши уравнения.



1) $y + 26 = 100$

• 2) $x - 128 = 140$

MIRGIF.COM

ІКруто



ІКласс! Сунер