


*Закрепление
вычислительных
навыков
в пределах 10.*

Сазнова Т.Е.
учитель начальных классов МОУ СОШ №222 г.Заречный
Пензенская обл.



$2 - 2 =$

$2 - 1 =$

$4 - 2 =$

$4 - 1 =$

$1 + 1 =$

$3 + 1 =$

$1 + 2 =$

$3 - 2 =$

$3 - 1 =$

$0 + 2 =$

$4 - 3 =$

$2 + 2 =$

$3 + 1 - 2 =$

$4 - 4 + 3 =$

$1 + 2 + 1 =$

$2 - 0 =$

$3 - 2 + 3 =$

$4 - 2 + 1 =$

$0 + 4 - 3 =$

$4 - (2 + 1) =$

$3 + (4 - 1) =$

$2 - (4 - 3) =$

$4 - (4 - 2) =$





$$2 - 1 =$$

$$4 - 2 =$$

$$4 - 1 =$$

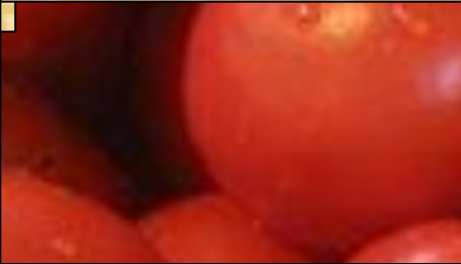
$$1 + 1 =$$

$$3 + 1 =$$

$$1 + 2 =$$

$$3 - 2 =$$

$$3 - 1 =$$



$$4 - 3 =$$

$$2 + 2 =$$

$$3 + 1 - 2 =$$

$$4 - 4 + 3 =$$

$$1 + 2 + 1 =$$



$$3 - 2 + 3 =$$

$$4 - 2 + 1 =$$

$$0 + 4 - 3 =$$

$$4 - (2 + 1) =$$

$$3 + (4 - 1) =$$

$$2 - (4 - 3) =$$

$$4 - (4 - 2) =$$





$$4 - 2 =$$

$$4 - 1 =$$

$$3 + 1 =$$

$$1 + 2 =$$

$$3 - 2 =$$

$$3 - 1 =$$



$$4 - 3 =$$

$$2 + 2 =$$

$$3 + 1 - 2 =$$

$$4 - 4 + 3 =$$

$$1 + 2 + 1 =$$



$$3 - 2 + 3 =$$

$$4 - 2 + 1 =$$

$$0 + 4 - 3 =$$

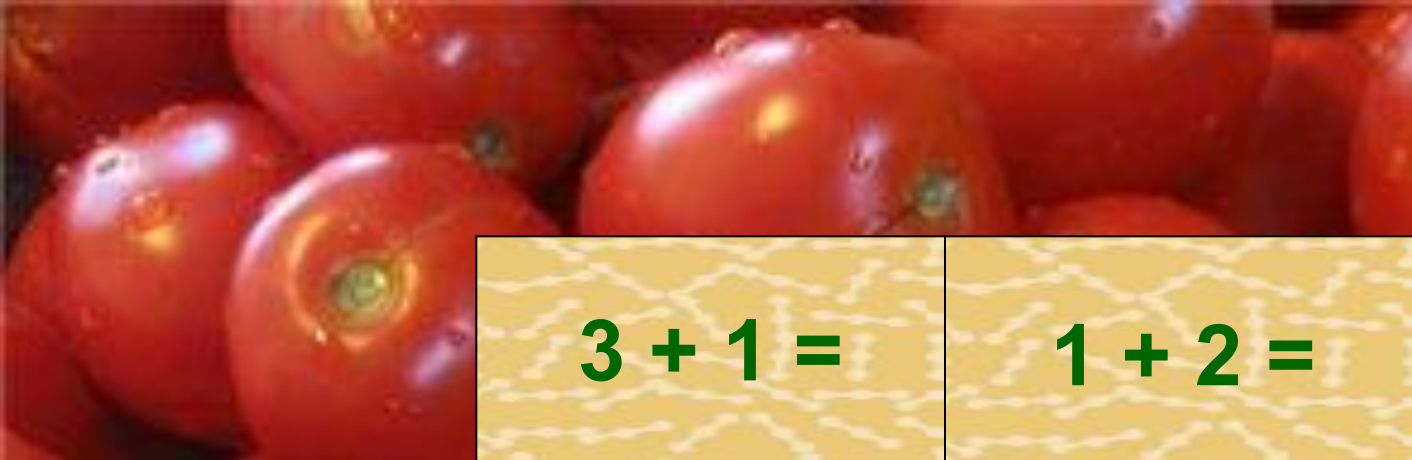
$$4 - (2 + 1) =$$

$$3 + (4 - 1) =$$

$$2 - (4 - 3) =$$

$$4 - (4 - 2) =$$





$$4 - 1 =$$

$$3 + 1 =$$

$$1 + 2 =$$

$$3 - 2 =$$

$$3 - 1 =$$



$$4 - 3 =$$



$$3 + 1 - 2 =$$

$$4 - 4 + 3 =$$

$$1 + 2 + 1 =$$

$$3 - 2 + 3 =$$

$$4 - 2 + 1 =$$


$$0 + 4 - 3 =$$

$$4 - (2 + 1) =$$

$$3 + (4 - 1) =$$

$$2 - (4 - 3) =$$

$$4 - (4 - 2) =$$



$$1 + 2 =$$

$$3 - 2 =$$

$$3 - 1 =$$

$$3 + 1 - 2 =$$

$$4 - 4 + 3 =$$

$$1 + 2 + 1 =$$

$$3 - 2 + 3 =$$

$$4 - 2 + 1 =$$

$$0 + 4 - 3 =$$

$$4 - (2 + 1) =$$

$$3 + (4 - 1) =$$

$$2 - (4 - 3) =$$

$$4 - (4 - 2) =$$





$$3 + 1 - 2 =$$

$$4 - 4 + 3 =$$

$$1 + 2 + 1 =$$

$$3 - 2 + 3 =$$

$$4 - 2 + 1 =$$

$$0 + 4 - 3 =$$

$$4 - (2 + 1) =$$

$$3 + (4 - 1) =$$

$$2 - (4 - 3) =$$

$$4 - (4 - 2) =$$





$$4 - (2 + 1) =$$

$$3 + (2 - 1) =$$

$$4 - (4 - 3) =$$

$$4 - (4 - 2) =$$





$$3 + (2 - 1) =$$

$$4 - (4 - 3) =$$


$$4 - (4 - 2) =$$






$$4 - (4 - 3) =$$

$$4 - (4 - 2) =$$





6

0

4


5

3

1

2

$$4 - (4 - 2) =$$



$2 + 3$

$6 - 1$

$4 + 1$

$6 - 4$

5 Составьте обратные примеры

$5 - 3$

$5 + 1$

$5 - 4$

$4 + 2$

$5 + 0$

$6 - 3$

$6 - 6$

$10 + 1$


$5 - 0$

$3 + 3$

$6 - 0$

$11 - 1$

$5 - 5$



$6 + 0$

$11 - 10$

$7 - 0$

$4 + 3$

$7 - 2$

$7 - 6$

$6 + 1$

$3 + 3$

$0 + 7$

$6 - 4$

Найдите «лишние примеры».

$2 + 5$

$7 - 3$

$4 - 2$

$7 - 5$


$5 - 2$

$7 - 7$

$7 - 4$

$7 - 1$









$4 + 4 =$

$8 - 7 =$

$5 + 3 =$

$8 - 8 =$




$8 - 5 =$

$8 + 0 =$

$8 - 6 =$

$8 - 1 =$



$1 + 7 =$

$8 - 4 =$

$8 - 0 =$


$8 - 2 =$



$6 + 2 =$

$8 - 3 =$

$3 + 4 =$



0

7

4

1

5

2

8

6

3

9


9

9

9

9

9



$$10 - 8 = \begin{array}{|c|} \hline 1 \\ \hline 0 \\ \hline \end{array}$$

$$4 + 6 = \begin{array}{|c|} \hline 8 \\ \hline \end{array}$$

$$5 + 5 = \begin{array}{|c|} \hline 6 \\ \hline \end{array}$$

$$10 - 3 = \begin{array}{|c|} \hline 5 \\ \hline \end{array}$$

$$0 + 10 = \begin{array}{|c|} \hline 2 \\ \hline \end{array}$$

$$10 - 7 = \begin{array}{|c|} \hline 4 \\ \hline \end{array}$$

$$10 - 10 = \begin{array}{|c|} \hline 1 \\ \hline 0 \\ \hline \end{array}$$

$$1 + 9 = \begin{array}{|c|} \hline 7 \\ \hline \end{array}$$

$$7 + 3 = \begin{array}{|c|} \hline 1 \\ \hline \end{array}$$

$$10 - 2 = \begin{array}{|c|} \hline 1 \\ \hline 0 \\ \hline \end{array}$$

$$10 - 4 = \begin{array}{|c|} \hline 1 \\ \hline 0 \\ \hline \end{array}$$

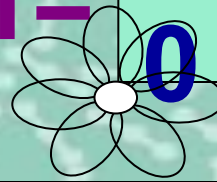
$$10 - 5 = \begin{array}{|c|} \hline 9 \\ \hline \end{array}$$

$$10 - 9 = \begin{array}{|c|} \hline 1 \\ \hline 0 \\ \hline \end{array}$$

$$10 - 6 = \begin{array}{|c|} \hline 3 \\ \hline \end{array}$$

$$8 + 2 = \begin{array}{|c|} \hline 0 \\ \hline \end{array}$$

$$10 - 1 = \begin{array}{|c|} \hline 1 \\ \hline 0 \\ \hline \end{array}$$



$3 - 2$

$9 - 5$

$10 - 6 + 3 =$

$9 - (7 - 2) =$

$7 - 6 - 1$

$3 + 7 - 6 =$

$10 - (6 + 3) =$

Вешите
круговые
примеры

$8 - 4 + 5 =$

$4 + (7 - 5) =$

$1 + 8$

$8 - 5$

$5 + 2 + 3 =$

$3 + (2 + 5) =$

$4 + 4$


$2 + 7$



$9 - 7 + 6 =$

$8 - (10 - 4) =$



$10 - 3$





Ссылки:

<http://www.jeunefille.ru/wp-content/uploads/2009/08/pomidor.jpg> - помидоры.

http://img0.liveinternet.ru/images/attach/c/0/37/358/37358260_52073.jpg - помидор

http://intoxicatedzodiac.com/blog/wp-content/uploads/fresh_orange_kinno_mandarin.jpg - апельсины.

<http://static.diary.ru/userdir/3/4/1/6/341641/24047315.jpg> - апельсин

http://byaki.net/uploads/posts/1170278527_untitle1.jpg - бананы.

http://www.weirdomatic.com/wp-content/pictures/bananas/banana_art_01.jpg - банан.

<http://s51.radikal.ru/i134/0906/5c/5ef61afb84c4.jpg> - огурцы.

<http://indianinthemachine.files.wordpress.com/2009/12/cucumber.jpg> - огурец.

http://www.bombayharbor.com/productImage/0400693001244444950/Blueberry_P_E.jpg - голубика.

http://athens.locallygrown.net/files/product/image/5923/blueberry_and_lemo_n_picture.bmp - ягода голубики

<http://deladoma.ru/images/stories/statyi/kylinariya-i-receptui/povidlo-vinograd.jpg> - виноград.

<http://gur-mania.ru/userfiles/Image/baklagan%2011.jpg> – баклажаны.

<http://www.properchik.ru/img/18.jpg> - баклажан.