

# Единицы измерения



1 см

1 дм = 10 см

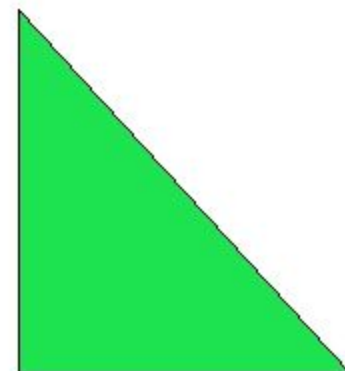

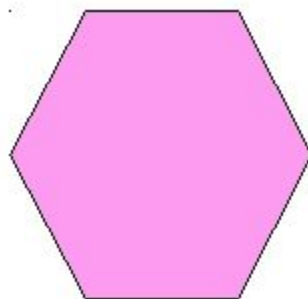


# Найди лишнюю фигуру

---

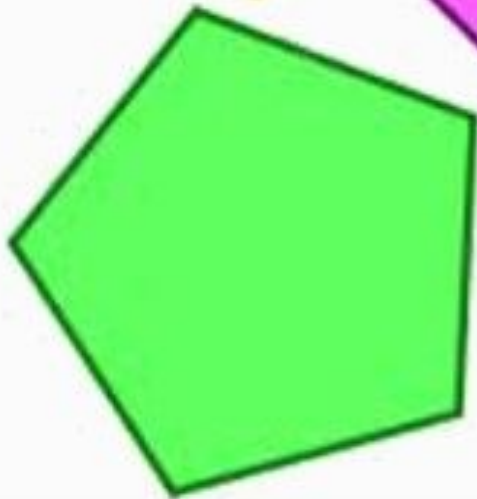
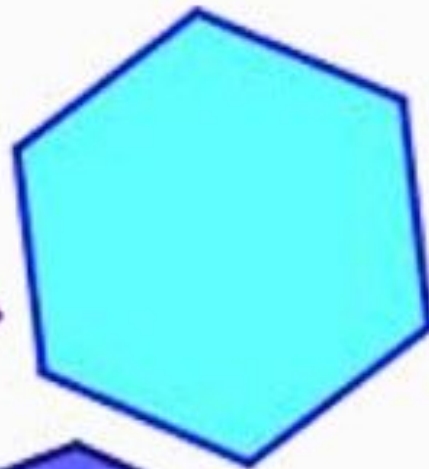



?



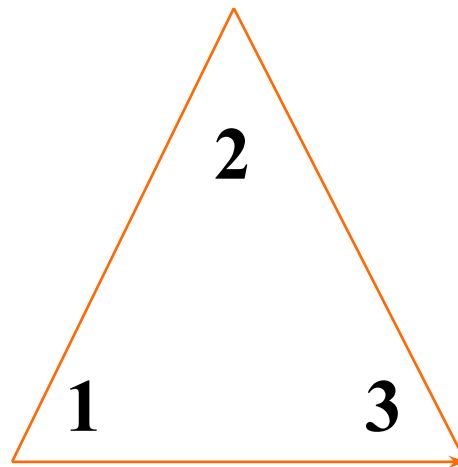

# Многоугольник

?






?

**треугольник**



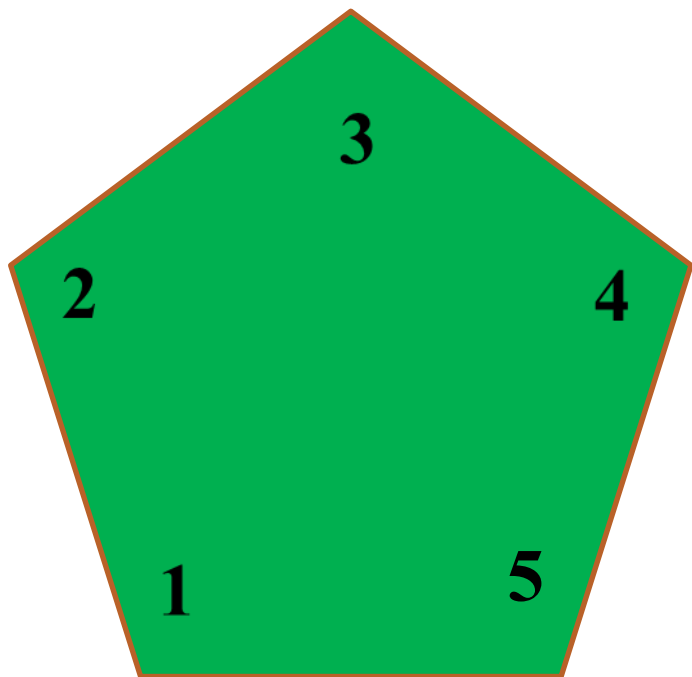
?

# четыреугольники



?

**ПЯТИУГОЛЬНИК**



# Самостоятельная работа

$5 + 2 =$

$7 - 2 =$

$6 + 1 =$

$5 + 1 =$

$7 - 1 =$

$6 + 2 =$

$8 + 2 =$

$4 - 2 =$

$2 + 1 =$

$8 + 1 =$

$4 - 1 =$

$2 + 2 =$

$10 - 1 =$

$10 - 2 =$

$6 - 1 =$

$6 - 2 =$



# Проверка

$$5 + 2 = 7$$

$$7 - 2 = 5$$

$$6 + 1 = 7$$

$$5 + 1 = 6$$

$$7 - 1 = 6$$

$$6 + 2 = 8$$

$$8 + 2 = 10$$

$$4 - 2 = 2$$

$$2 + 1 = 3$$

$$8 + 1 = 9$$

$$4 - 1 = 3$$

$$2 + 2 = 4$$

$$10 - 1 = 9$$

$$10 - 2 = 8$$

$$6 - 1 = 5$$

$$6 - 2 = 4$$

