




---

$$1 + \square = 10$$

---






*Угадайте, какие  
известные  
женщины  
изображены на  
фото?!*







$$1 + 9 = 10$$



$$2 + \square = 10$$









$$1 + 9 = 10$$



$$2 + 8 = 10$$



$$3 + \square = 10$$







$$1 + 9 = 10$$



$$2 + 8 = 10$$



$$3 + 7 = 10$$



$$4 + \square = 10$$









$$1 + 9 = 10$$



$$2 + 8 = 10$$



$$3 + 7 = 10$$



$$4 + 6 = 10$$

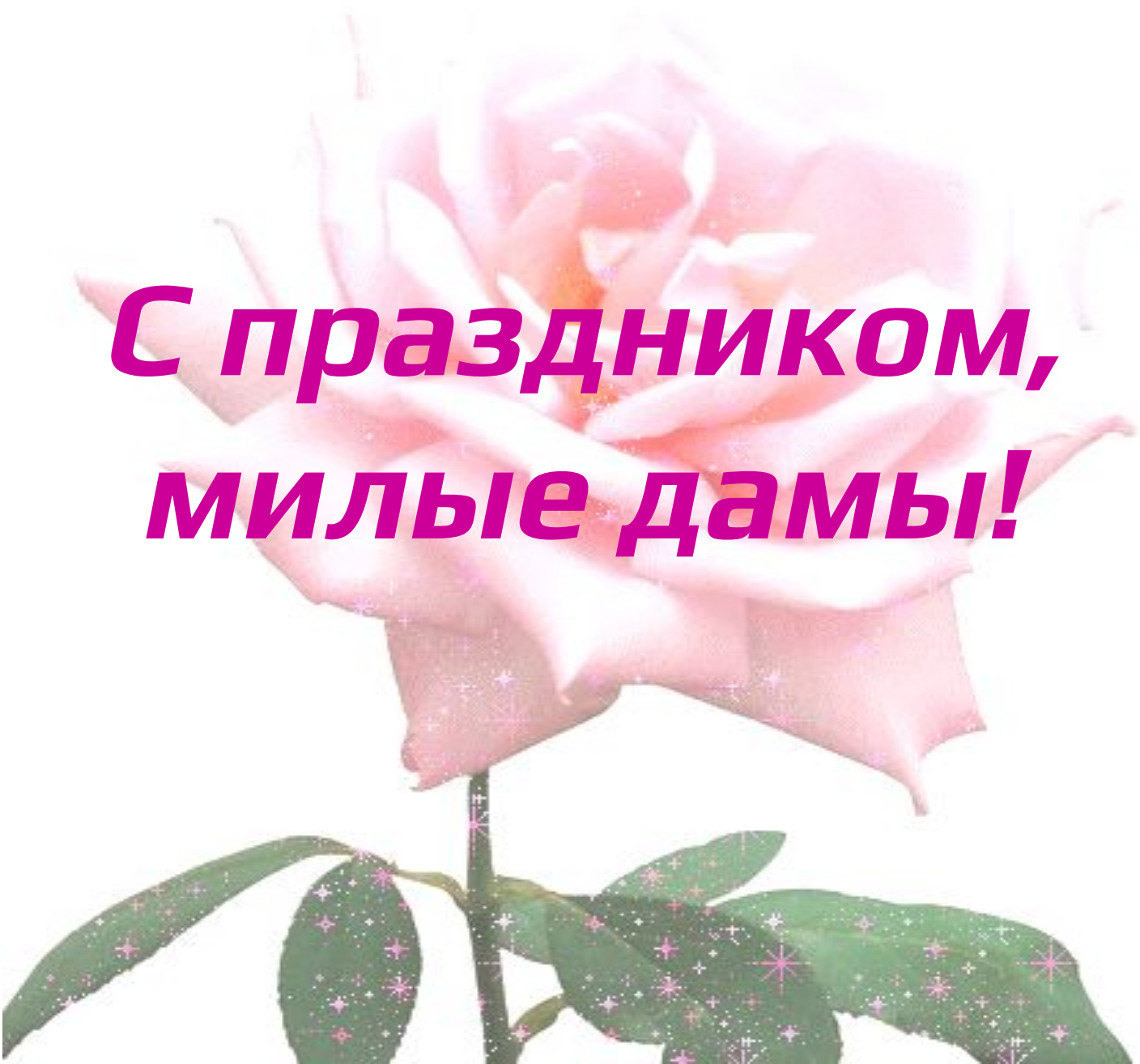


$$5 + \square = 10$$









***С праздником,  
милые дамы!***

