






Математик

а




$$(200+450):5$$

$$(720-120):3$$


$$5*19$$

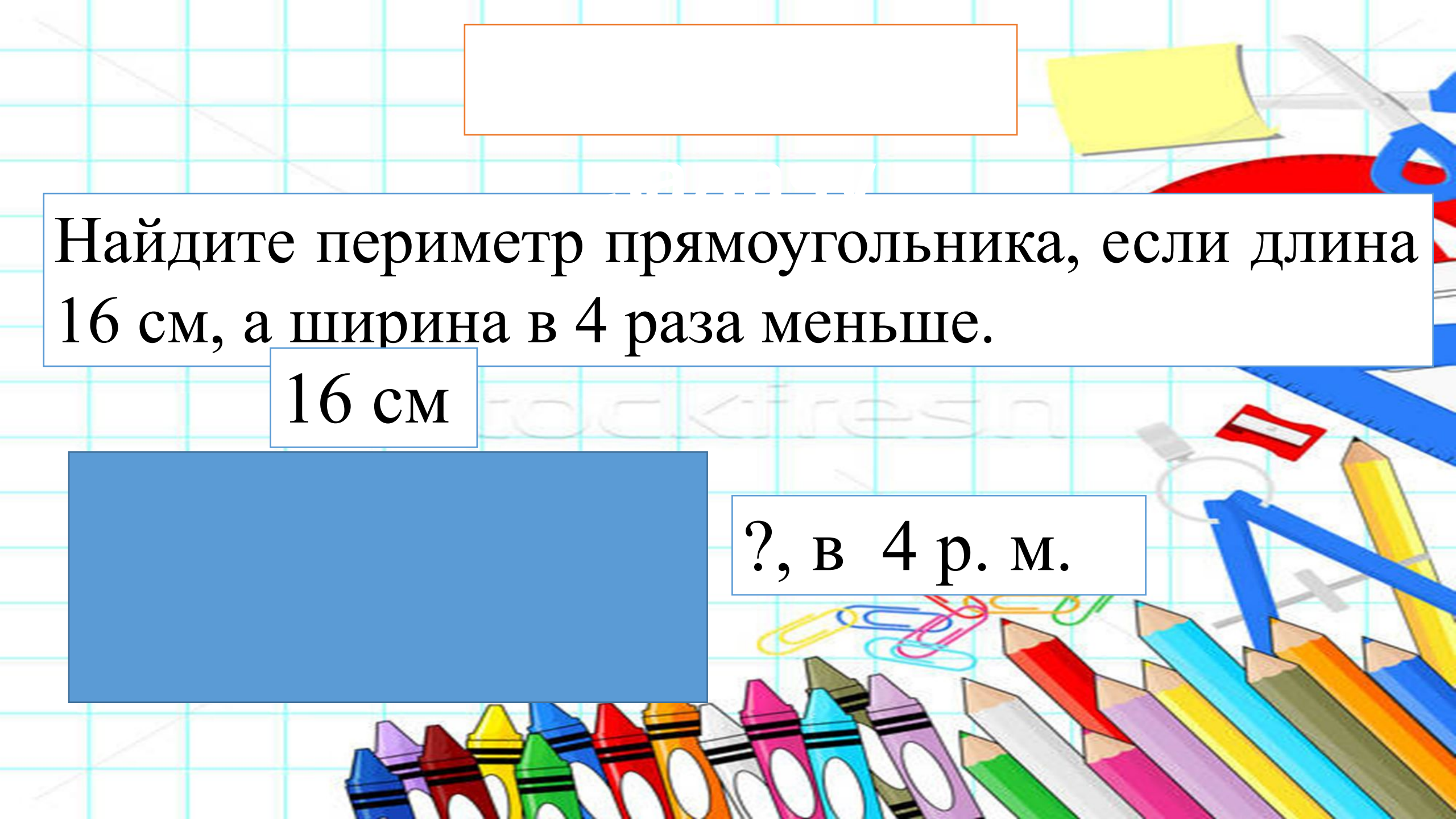

$$360:6$$

$$140:20$$

$$540:60$$


$$0*1$$

$$7:1$$




Найдите периметр прямоугольника, если длина 16 см, а ширина в 4 раза меньше.

16 см



?, в 4 р. м.



Blank rectangular box for a title or heading.

$$\begin{array}{r|l} 324 & 3 \\ - 3 & 108 \\ \hline 2 & \\ - 0 & \\ \hline 24 & \\ - 24 & \\ \hline 0 & \end{array}$$

$$\begin{array}{r|l} 806 & 2 \\ - 8 & 403 \\ \hline 0 & \\ - 0 & \\ \hline 6 & \\ - 6 & \\ \hline 0 & \end{array}$$



[Empty rectangular box]

[Empty rectangular box]

Introduction

[Empty rectangular box]

1998

